

Getting every student ready for every class



Universidad Autónoma de Madrid
1 June 2020



Getting every student ready for every class



Universidad Autónoma de Madrid
1 June 2020


















an illusion. . .


A photograph of a railway track with a wavy, undulating path, illustrating the concept of thermal expansion. The track is made of gravel and has a blue-painted metal rail. The path is curved and wavy, showing the effect of thermal expansion on the track's geometry. The text "thermal expansion" is overlaid on the image.


thermal expansion





all of them





1. Go to: <http://bit.ly/UAMtest>

2. Enter info

3. Join Session ID: 40796710

**Consider a rectangular metal plate
with a circular hole in it.**

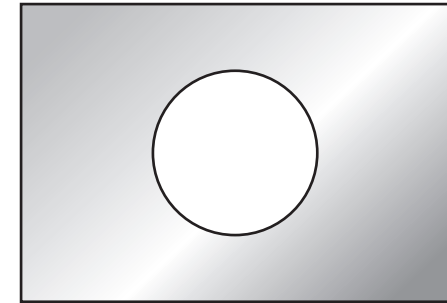


1 bit.ly/UAMtest

2 enter info

3 join 40796710

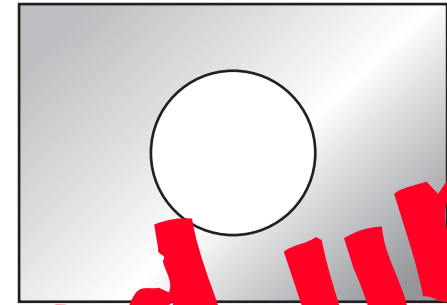
Consider a rectangular metal plate with a circular hole in it.



When the plate is uniformly heated, the diameter of the hole

- 1. increases.**
- 2. stays the same.**
- 3. decreases.**

Consider a rectangular metal plate with a circular hole in it.



When the plate is uniformly heated, the diameter of the hole

1. increases.
2. stays the same.
3. decreases.

you got all fired up!

Consider a rectangular metal plate with a circular hole in it.



When the plate is uniformly heated, the diameter of the hole

- 1. increases.**
- 2. stays the same.**
- 3. decreases.**

Before I tell you the answer, let's analyze what happened.

Before I tell you the answer, let's analyze what happened.

You...

Before I tell you the answer, let's analyze what happened.

You...

1. made a commitment

Before I tell you the answer, let's analyze what happened.

You...

- 1. made a commitment**
- 2. externalized your answer**

Before I tell you the answer, let's analyze what happened.

You...

- 1. made a commitment**
- 2. externalized your answer**
- 3. moved from the answer/fact to reasoning**

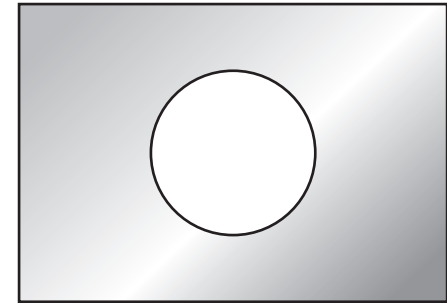
Before I tell you the answer, let's analyze what happened.

You...

- 1. made a commitment**
- 2. externalized your answer**
- 3. moved from the answer/fact to reasoning**
- 4. became emotionally invested in the learning process**

Consider a rectangular metal plate with a circular hole in it.

When the plate is uniformly heated, the diameter of the hole



- 1. increases.**
- 2. stays the same.**
- 3. decreases.**


Consider a rectangular metal plate with a circular hole in it.




When the plate is uniformly heated, the diameter of the hole

- 1. increases. ✓**
- 2. stays the same.
- 3. decreases.


consider atoms at rim of hole




consider atoms at rim of hole



consider atoms at rim of hole



consider atoms at rim of hole



consider atoms at rim of hole

you won't forget this

An aerial photograph of a gravel path that winds in a series of S-curves. The path is bordered by a thin orange line on one side and a thin blue line on the other. The path is set against a background of green grass and gravel. The text "points worth noting" is centered at the top of the image.

points worth noting

- **my “clear” lecture wasn’t very good**
- **discussion promoted “aha” moments**



**information
transfer**

sense-making



in class

**information
transfer**

sense-making

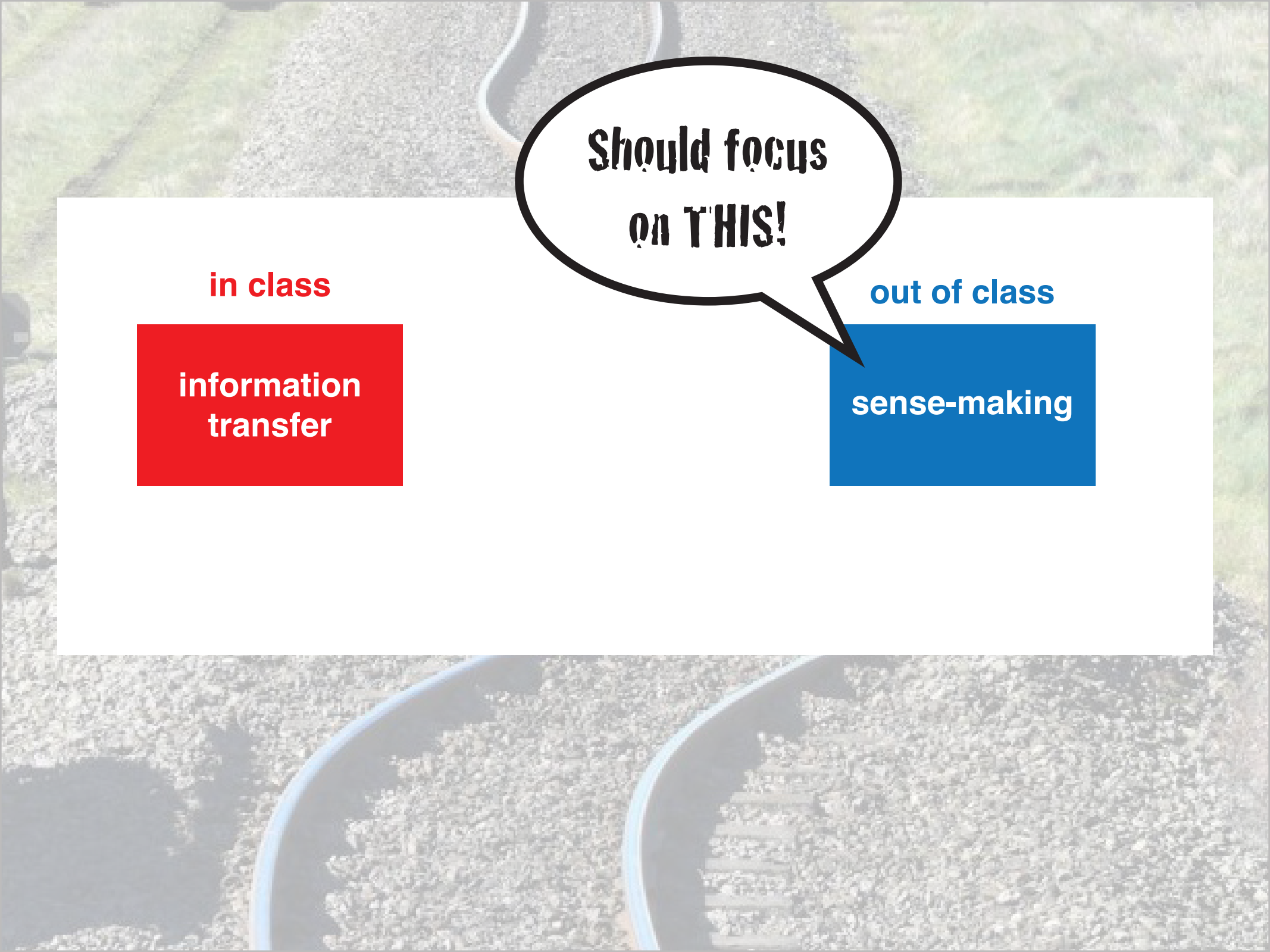


in class

**information
transfer**

out of class

sense-making



**Should focus
on THIS!**

in class

**information
transfer**

out of class

sense-making



out of class

**information
transfer**

in class

sense-making

out of class

**information
transfer**

in class

sense-making

Peer Instruction

question

question



think

question



think



poll

question



think



poll



discuss

question



think



poll



discuss



repoll

question



think



poll



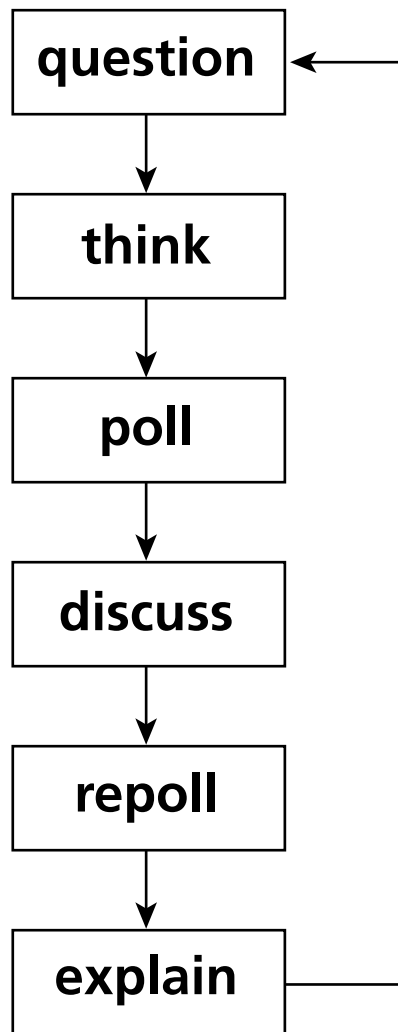
discuss

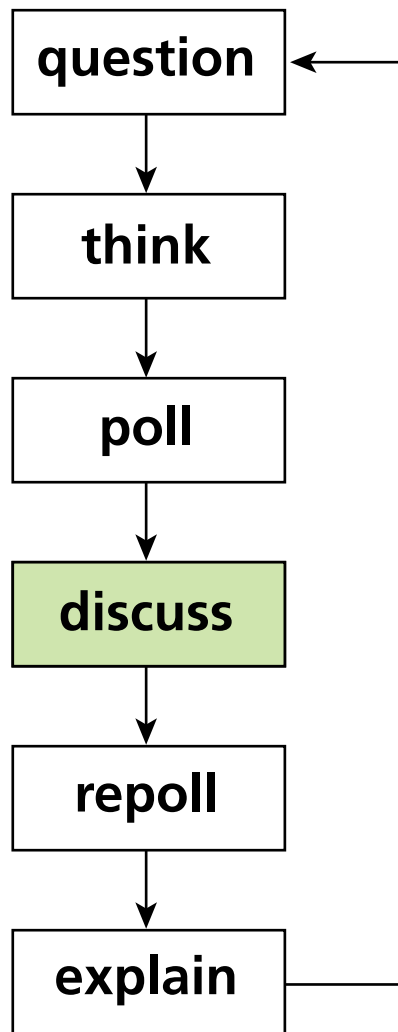


repoll



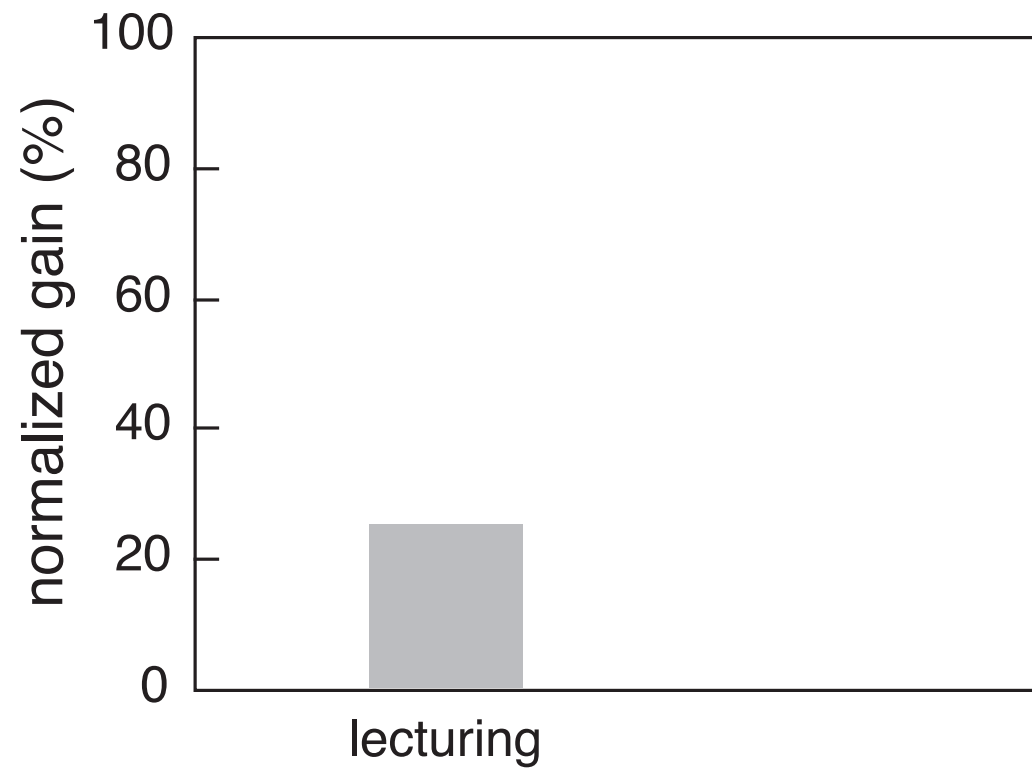
explain

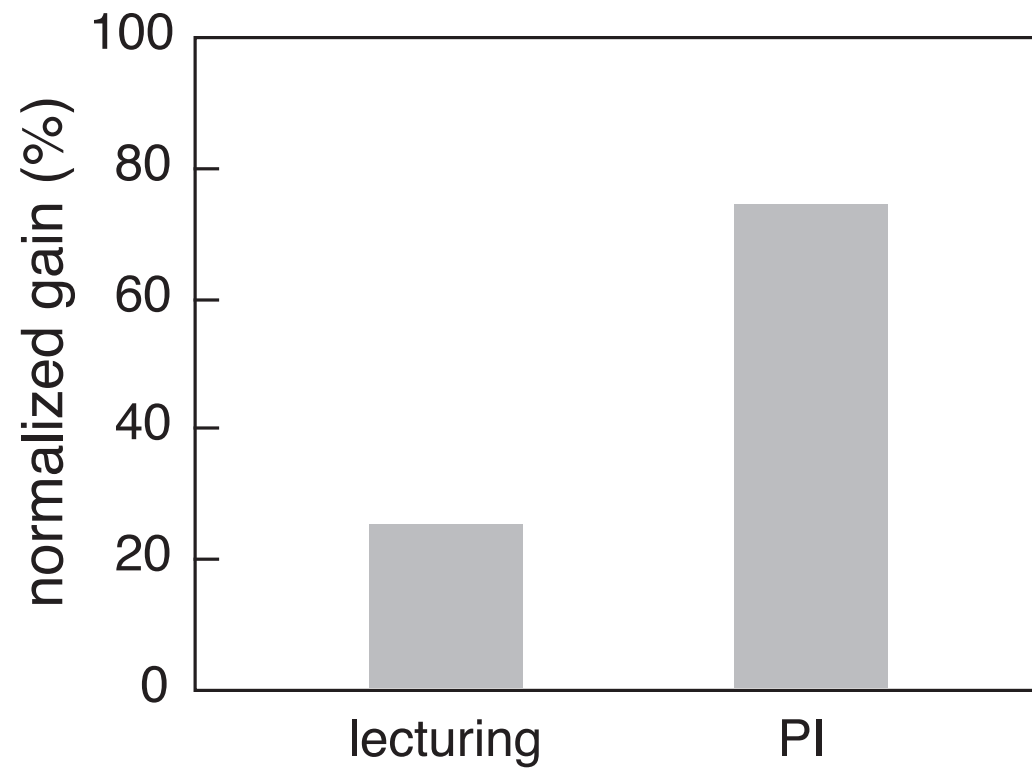




Higher learning gains

INSTRUCTION









Higher learning gains

Better retention

INSTRUCTION



how to effectively transfer information outside classroom?





but...



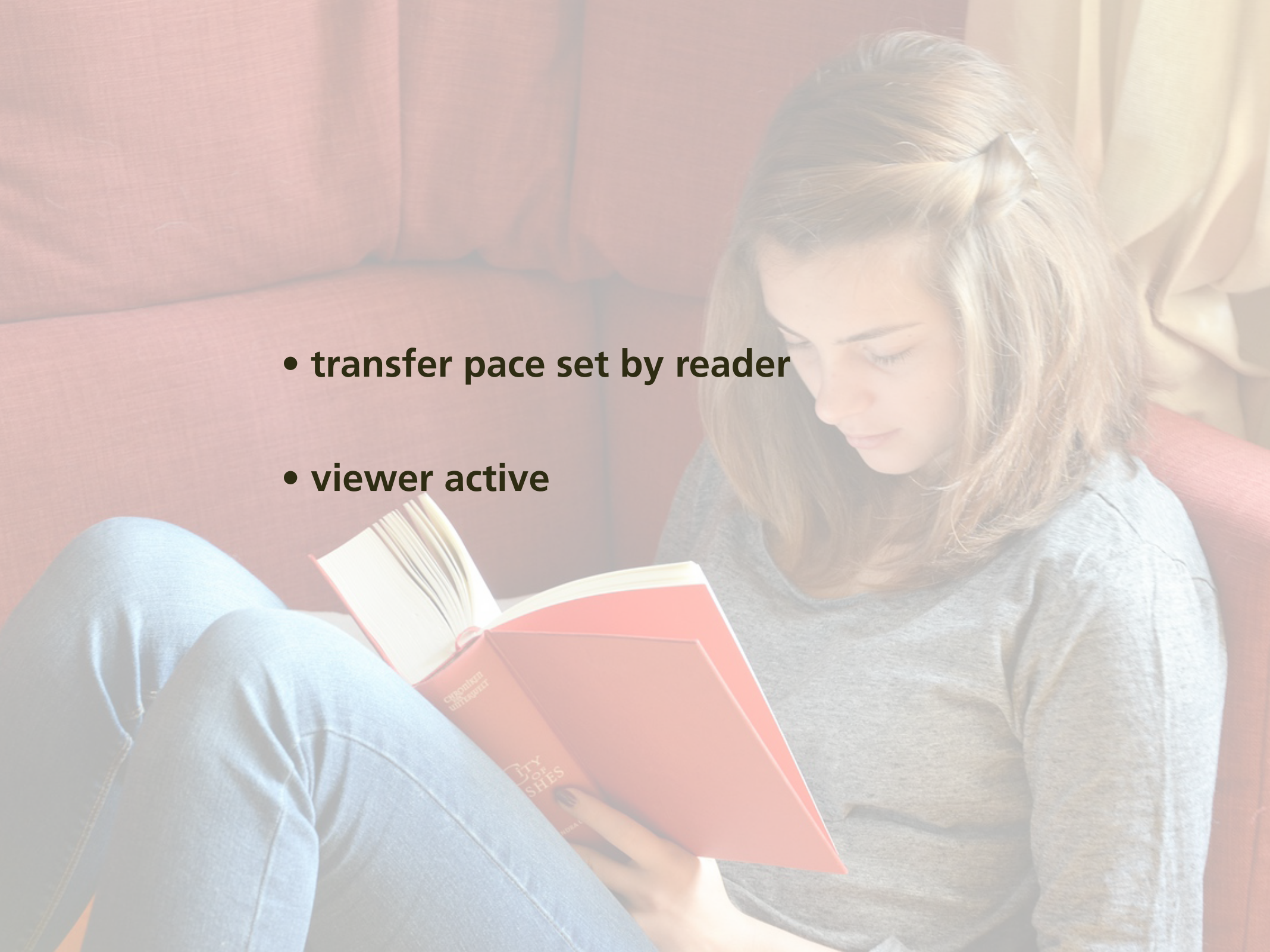
- transfer pace set by video
- viewer passive
- viewing/attention tanks as time passes
- isolated/individual experience






we're simply moving this outside classroom!



- 
- **transfer pace set by reader**
 - **viewer active**

but...





**isolated/individual experience &
no real accountability**



want:
every student prepared for every class



want:
***every* student prepared for *every* class**
(without additional instructor effort)

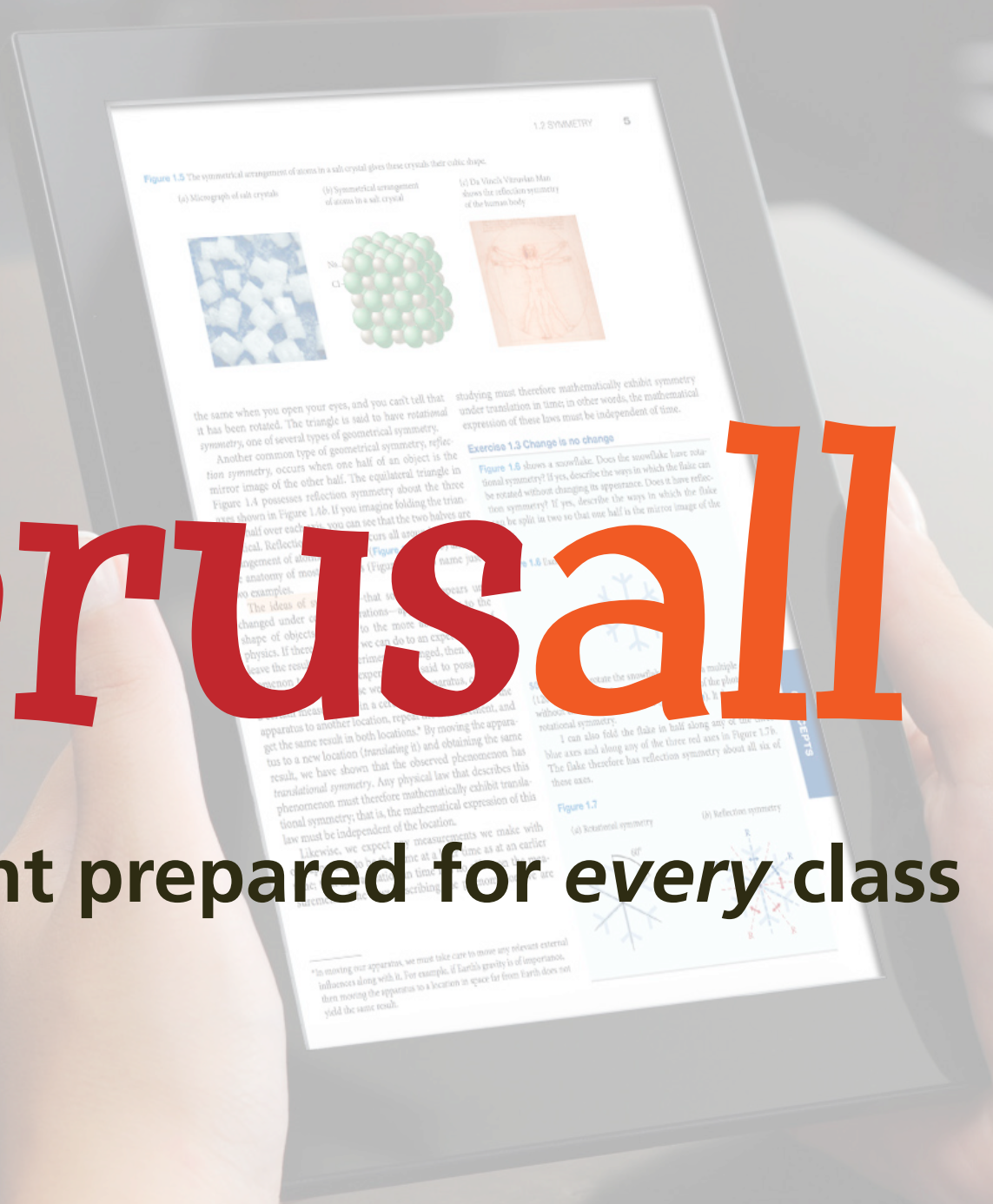
A stylized illustration of a classroom with several students sitting at desks. The students are represented by simplified, colorful shapes in shades of yellow, green, blue, purple, and pink. They are all facing forward, and some are holding pens or pencils. The desks are light-colored, and the background is a soft, out-of-focus representation of a classroom environment.

Solution

**turn out-of-class component
also into a social interaction!**

Perusall

every student prepared for every class



76 CHAPTER 4 MOMENTUM

In the preceding two chapters, we developed a mathematical framework for describing motion along a straight line. In this chapter, we continue our study of motion by investigating inertia, a property of objects that affects their motion. The experiments we carry out in studying inertia lead us to discover one of the most fundamental laws in physics—conservation of momentum.

4.1 Friction

Picture a block of wood sitting motionless on a smooth wooden surface. If you give the block a shove, it slides some distance but eventually comes to rest. Depending on the smoothness of the block and the smoothness of the wooden surface, this stopping may happen sooner or it may happen later. If the two surfaces in contact are very smooth and slippery, the block slides for a longer time interval than if the surfaces are rough. Notice that you have a very ordinary day experience: A hockey puck slides easily on ice but not on a rough road.

Figure 4.1 shows how the velocity of a wooden block decreases on three different surfaces. The slowing down is due to *friction*—the resistance to motion that one surface or object encounters when moving over another. Notice that, during the interval covered by the velocity-versus-time graph, the velocity decreases as the block slides over ice; it hardly decreases as the block slides over a smooth surface; and it decreases very rapidly as the block slides over a rough surface. The effect of friction is to bring two objects to rest with respect to each other—in this case the wooden block and the surface it is sliding on. The less friction there is, the longer it takes for the block to come to rest.

Figure 4.1 Velocity-versus-time graph for a wooden block sliding on three different surfaces. The rougher the surface, the more quickly the velocity decreases.



Figure 4.2 Low-friction track and carts used in the experiments described in this chapter.



You may wonder whether it is possible to make surfaces that have no friction at all, such that an object, once given a shove, continues to glide forever. There is no totally frictionless surface over which objects slide forever, but there are ways to minimize friction. You can, for instance, float an object on a cushion of air. This is most easily accomplished with a low-friction surface—like a smooth surface of water. The air serves as a cushion on which a conveniently shaped object can float, with friction between the object and the track all but eliminated. Alternatively, one can use wheeled carts with low-friction bearings on an ordinary track. Figure 4.2 shows low-friction carts you may have encountered in your lab or class. Although there is still some friction both for low-friction tracks and for the track shown in Figure 4.2, this friction is so small that it can be ignored during an experiment. For example, if the track in Figure 4.2 is horizontal, carts move along its length without slowing down appreciably. In other words:

In the absence of friction, objects moving along a horizontal track keep moving without slowing down.

Another advantage of using such carts is that the track constrains the motion to being along a straight line. We can then use a high-speed camera to record the cart's position at various instants, and from that information determine its speed and acceleration.



4.1 (a) Are the accelerations of the motions shown in Figure 4.1 constant? (b) For which surface is the acceleration largest in magnitude?

76 CHAPTER 4 MOMENTUM

In the preceding two chapters, we developed a mathematical framework for describing motion along a straight line. In this chapter, we continue our study of motion by investigating inertia, a property of objects that affects their motion. The experiments we carry out in studying inertia lead us to discover one of the most fundamental laws in physics—conservation of momentum.

4.1 Friction

Picture a block of wood sitting motionless on a smooth wooden surface. If you give the block a shove, it slides some distance but eventually comes to rest. Depending on the smoothness of the block and the smoothness of the wooden surface, this stopping may happen sooner or it may happen later. If the two surfaces in contact are very smooth and slippery, the block slides for a longer time interval than if the surfaces are rough or sticky. This is a familiar, everyday experience: A hockey puck slides easily on ice but not on a rough road.

Figure 4.1 shows how the velocity of a wooden block decreases on three different surfaces. The slowing down is due to *friction*—the resistance to motion that one surface or object encounters when moving over another. Notice that the velocity decreases more rapidly on the rougher surface. The block slides easily over the smooth surface. To bring two objects to rest with the same force, the less friction there is, the more quickly they come to rest.

Figure 4.1 Velocity-versus-time graph for a wooden block sliding on three different surfaces. The rougher the surface, the more quickly the velocity decreases.



Figure 4.2 Low-friction track and carts used in the experiments described in this chapter.



You may wonder whether it is possible to make surfaces that have no friction at all, such that an object, once given a shove, continues to glide forever. There is no totally frictionless surface over which objects slide forever, but there are ways to minimize friction. You can, for instance, float an object on a cushion of air. This is most easily accomplished with an air hockey table, in which the puck is cushioned with a thin layer of air which reduces friction. The air serves as a cushion on which a conveniently shaped object can float, with friction between the object and the track all but eliminated. Alternatively, one can use wheeled carts with low-friction bearings on an ordinary track. Figure 4.2 shows low-friction carts you may have encountered in your physics lab. Although there is still some friction, the friction is so small that it can be neglected. For example, if the track is perfectly horizontal, the carts move along its length with constant velocity. In other words:

In the absence of friction, objects on a horizontal track keep moving without slowing down.

Another advantage of using such carts is that the track constrains the motion to being along a straight line. We can then use a high-speed camera to record the cart's position at various instants, and from that information determine its speed and acceleration.



4.1 (a) Are the accelerations of the motions shown in Figure 4.1 constant? (b) For which surface is the acceleration largest in magnitude?

log in through social network



76 CHAPTER 4 MOMENTUM

In the preceding two chapters, we developed a mathematical framework for describing motion along a straight line. In this chapter, we continue our study of motion by investigating inertia, a property of objects that affects their motion. The experiments we carry out in studying inertia lead us to discover one of the most fundamental laws in physics—conservation of momentum.

4.1 Friction

Picture a block of wood sitting motionless on a smooth wooden surface. If you give the block a shove, it slides some distance but eventually comes to rest. Depending on the smoothness of the block and the smoothness of the wooden surface, this stopping may happen sooner or it may happen later. If the two surfaces in contact are very smooth and slippery, the block slides for a longer time interval than if the surfaces are rough or sticky. This you know from everyday experience: A hockey puck slides easily on ice but not on a rough road.

Figure 4.1 shows how the velocity of a wooden block decreases on three different surfaces. The slowing down is due to *friction*—the resistance to motion that one surface or object encounters when moving over another. Notice that, during the interval covered by the velocity-versus-time graph, the velocity decreases as the block slides over ice; it is hardly observable. The block slides easily over ice because there is very little friction between the two surfaces. The effect of friction is to bring two objects to rest with respect to each other—in this case the wooden block and the surface it is sliding on. The less friction there is, the longer it takes for the block to come to rest.

Figure 4.1 Velocity-versus-time graph for a wooden block sliding on three different surfaces. The rougher the surface, the more quickly the velocity decreases.



Figure 4.2 Low-friction track and carts used in the experiments described in this chapter.



You may wonder whether it is possible to make surfaces that have no friction at all, such that an object, once given a shove, continues to glide forever. There is no totally frictionless surface over which objects slide forever, but there are ways to minimize friction. You can, for instance, float an object on a cushion of air. This is most easily accomplished with a low-friction track—a track whose surface is dotted with little holes through which pressurized air blows. The air serves as a cushion on which a conveniently shaped object can float, with friction between the object and the track all but eliminated. Alternatively, one can use wheeled carts with low-friction bearings on an ordinary track. Figure 4.2 shows low-friction carts you may have encountered in your lab or class. Although there is still some friction both for low-friction tracks and for the track shown in Figure 4.2, this friction is so small that it can be ignored during an experiment. For example, if the track in Figure 4.2 is horizontal, carts move along its length without slowing down appreciably. In other words:

In the absence of friction, objects moving along a horizontal track keep moving without slowing down.

Another advantage of using such carts is that the track constrains the motion to being along a straight line. We can then use a high-speed camera to record the cart's position at various instants, and from that information determine its speed and acceleration.



4.1 (a) Are the accelerations of the motions shown in Figure 4.1 constant? (b) For which surface is the acceleration largest in magnitude?

76 CHAPTER 4 MOMENTUM

In the preceding two chapters, we developed a mathematical framework for describing motion along a straight line. In this chapter, we continue our study of motion by investigating inertia, a property of objects that affects their motion. The experiments we carry out in studying inertia lead us to discover one of the most fundamental laws in physics—conservation of momentum.

4.1 Friction

Picture a block of wood sitting motionless on a smooth wooden surface. If you give the block a shove, it slides some distance but eventually comes to rest. Depending on the smoothness of the block and the smoothness of the wooden surface, this may take a long time. If the surface is slippery, the block slides for a longer time interval than if the surfaces are rough or sticky. This you know from everyday experience: A hockey puck slides easily on ice but not on a rough road.

Figure 4.1 shows how the velocity of a wooden block decreases on three different surfaces. The slowing down is due to *friction*—the resistance to motion that one surface or object encounters when moving over another. Notice that, during the interval covered by the velocity-versus-time graph, the velocity decreases as the block slides over ice; it hardly decreases as the block slides over a smooth surface; and it decreases rapidly as the block slides over a rough surface. The effect of friction is to bring two objects to rest with respect to each other—in this case the wooden block and the surface it is sliding on. The less friction there is, the longer it takes for the block to come to rest.

Figure 4.1 Velocity-versus-time graph for a wooden block sliding on three different surfaces. The rougher the surface, the more quickly the velocity decreases.



Figure 4.2 Low-friction track and carts used in the experiments described in this chapter.



You may wonder whether it is possible to make surfaces that have no friction at all, such that an object, once given a shove, continues to glide forever. There is no totally frictionless surface over which objects slide forever, but there are ways to minimize friction. You can, for instance, float an object on a cushion of air. This is most easily accomplished with a low-friction track—a track whose surface is dotted with little holes through which pressurized air blows. The air serves as a cushion on which a conveniently shaped object can float, with friction between the object and the track all but eliminated. Alternatively, one can use wheeled carts with low-friction bearings on an ordinary track. Figure 4.2 shows low-friction carts you may have encountered in your lab or class. Although there is still some friction both for low-friction tracks and for the track shown in Figure 4.2, this friction is so small that it can be ignored during an experiment. For example, if the track in Figure 4.2 is horizontal, carts move along its length without slowing down appreciably. In other words:

In the absence of friction, objects moving along a horizontal track keep moving without slowing down.

Another advantage of using such carts is that the track constrains the motion to being along a straight line. We can then use a high-speed camera to record the cart's position at various instants, and from that information determine its speed and acceleration.



4.1 (a) Are the accelerations of the motions shown in Figure 4.1 constant? (b) For which surface is the acceleration largest in magnitude?

76 CHAPTER 4 MOMENTUM

In the preceding two chapters, we developed a mathematical framework for describing motion along a straight line. In this chapter, we continue our study of motion by investigating inertia, a property of objects that affects their motion. The experiments we carry out in studying inertia lead us to discover one of the most fundamental laws in physics—conservation of momentum.

4.1 Friction

Picture a block of wood sitting motionless on a smooth wooden surface. If you give the block a shove, it slides some distance but eventually comes to rest. Depending on the smoothness of the block and the smoothness of the wooden surface, this stopping may happen sooner or it may happen later. If the two surfaces in contact are very smooth and slippery, the block slides for a longer time interval than if the surfaces are rough or sticky. This you know from everyday experience: A hockey puck slides easily on ice but not on a rough road.

Figure 4.1 shows how the velocity of a wooden block decreases on three different surfaces. The slowing down is due to *friction*—the force that opposes the motion of an object encountered during the interaction. In the velocity-versus-time graph, the velocity decreases as the block slides over ice is hardly observable. The block slides easily over ice because there is very little friction between the two surfaces. The effect of friction is to bring two objects to rest with respect to each other—in this case the wooden block and the surface it is sliding on. The less friction there is, the longer it takes for the block to come to rest.

Figure 4.1 Velocity-versus-time graph for a wooden block sliding on three different surfaces. The rougher the surface, the more quickly the velocity decreases.



Figure 4.2 Low-friction track and carts used in the experiments described in this chapter.



You may wonder whether it is possible to make surfaces that have no friction at all, such that an object, once given a shove, continues to glide forever. There is no totally frictionless surface over which objects slide forever, but there are ways to minimize friction. You can, for instance, float an object on a cushion of air. This is most easily accomplished with a low-friction track—a track whose surface is dotted with little holes through which pressurized air blows. The air serves as a cushion on which a conveniently shaped object can float, with friction between the object and the track all but eliminated. Alternatively, one can use wheeled carts with low-friction bearings on an ordinary track. Figure 4.2 shows the track and carts used in the experiments described in this chapter. In your book, the track is shown both for the air-cushion and for the wheeled carts. In Figure 4.2, this friction is so small that it can be ignored during an experiment. For example, if the track in Figure 4.2 is horizontal, carts move along its length without slowing down appreciably. In other words:

In the absence of friction, objects moving along a horizontal track keep moving without slowing down.

Another advantage of using such carts is that the track constrains the motion to being along a straight line. We can then use a high-speed camera to record the cart's position at various instants, and from that information determine its speed and acceleration.



4.1 (a) Are the accelerations of the motions shown in Figure 4.1 constant? (b) For which surface is the acceleration largest in magnitude?

76 CHAPTER 4 MOMENTUM

In the preceding two chapters, we developed a mathematical framework for describing motion along a straight line. In this chapter, we continue our study of motion by investigating inertia, a property of objects that affects their motion. The experiments we carry out in studying inertia lead us to discover one of the most fundamental laws in physics—conservation of momentum.

4.1 Friction

Picture a block of wood sitting motionless on a smooth wooden surface. If you give the block a shove, it slides some distance but eventually comes to rest. Depending on the smoothness of the block and the smoothness of the wooden surface, this stopping may happen sooner or it may happen later. If the two surfaces in contact are very smooth and slippery, the block slides for a longer time interval than if the surfaces are rough or sticky. This you know from everyday experience: A hockey puck slides easily on ice but not on a rough road.

Figure 4.1 shows how the velocity of a wooden block decreases on three different surfaces. The rougher the surface, the more quickly the velocity decreases. This is due to *friction*—the resistance to motion that one surface or object encounters when moving over another. Notice that, during the interval covered by the velocity-versus-time graph, the velocity decreases as the block slides over ice is hardly observable. The block slides easily over ice because there is very little friction between the two surfaces. The effect of friction is to bring two objects to rest with respect to each other—in this case the wooden block and the surface it is sliding on. The less friction there is, the longer it takes for the block to come to rest.

Figure 4.1 Velocity-versus-time graph for a wooden block sliding on three different surfaces. The rougher the surface, the more quickly the velocity decreases.



Figure 4.2 Low-friction track and carts used in the experiments described in this chapter.



You may wonder whether it is possible to make surfaces that have no friction at all, such that an object, once given a shove, continues to glide forever. There is no totally frictionless surface over which objects slide forever, but there are ways to minimize friction. You can, for instance, float an object on a cushion of air. This is most easily accomplished with a low-friction track—a track whose surface is dotted with little holes through which pressurized air blows. The air serves as a cushion on which a conveniently shaped object can float, with friction between the object and the track all but eliminated. The track shown in Figure 4.2 shows low-friction carts you may have encountered in your lab or class. Although there is still some friction both for low-friction tracks and for the track shown in Figure 4.2, this friction is so small that it can be ignored during an experiment. For example, if the track in Figure 4.2 is horizontal, carts move along its length without slowing down appreciably. In other words:

In the absence of friction, objects moving along a horizontal track keep moving without slowing down.

Another advantage of using such carts is that the track constrains the motion to being along a straight line. We can then use a high-speed camera to record the cart's position at various instants, and from that information determine its speed and acceleration.



4.1 (a) Are the accelerations of the motions shown in Figure 4.1 constant? (b) For which surface is the acceleration largest in magnitude?

...opens chat window



Enter your comment or question and press Enter

76 CHAPTER 4 MOMENTUM

In the preceding two chapters, we developed a mathematical framework for describing motion along a straight line. In this chapter, we continue our study of motion by investigating inertia, a property of objects that affects their motion. The experiments we carry out in studying inertia lead us to discover one of the most fundamental laws in physics—conservation of momentum.

4.1 Friction

Picture a block of wood sitting motionless on a smooth wooden surface. If you give the block a shove, it slides some distance but eventually comes to rest. Depending on the smoothness of the block and the smoothness of the wooden surface, this stopping may happen sooner or it may happen later. If the two surfaces in contact are very smooth and slippery, the block slides for a longer time interval than if the surfaces are rough or sticky. This you know from everyday experience: A hockey puck slides easily on ice but not on a rough road.

Figure 4.1 shows how the velocity of a wooden block decreases on three different surfaces. The slowing down is due to *friction*—the resistance to motion that one surface or object encounters when moving over another. Notice that, during the interval covered by the velocity-versus-time graph, the velocity decreases as the block slides over ice; it is hardly observable. The block slides easily over ice because there is very little friction between the two surfaces. The effect of friction is to bring two objects to rest with respect to each other—in this case the wooden block and the surface it is sliding on. The less friction there is, the longer it takes for the block to come to rest.

Figure 4.1 Velocity-versus-time graph for a wooden block sliding on three different surfaces. The rougher the surface, the more quickly the velocity decreases.



Figure 4.2 Low-friction track and carts used in the experiments described in this chapter.



You may wonder whether it is possible to make surfaces that have no friction at all, such that an object, once given a shove, continues to glide forever. There is no totally frictionless surface over which objects slide forever, but there are ways to minimize friction. You can, for instance, float an object on a cushion of air. This is most easily accomplished with a low-friction track—a track whose surface is dotted with little holes through which pressurized air blows. The air serves as a cushion on which a conveniently shaped object can float, with friction between the object and the track all but eliminated. Alternatively, one can use wheeled carts with low-friction bearings on an ordinary track. Figure 4.2 shows low-friction carts you may have encountered in your lab or class. Although there is still some friction both for low-friction tracks and for the track shown in Figure 4.2, this friction is so small that it can be ignored during an experiment. For example, if the track in Figure 4.2 is horizontal, carts move along its length without slowing down appreciably. In other words:

In the absence of friction, objects moving along a horizontal track keep moving without slowing down.

Another advantage of using such carts is that the track constrains the motion to being along a straight line. We can then use a high-speed camera to record the cart's position at various instants, and from that information determine its speed and acceleration.



4.1 (a) Are the accelerations of the motions shown in Figure 4.1 constant? (b) For which surface is the acceleration largest in magnitude?

Enter your comment or question and press Enter

76 CHAPTER 4 MOMENTUM

In the preceding two chapters, we developed a mathematical framework for describing motion along a straight line. In this chapter, we continue our study of motion by investigating inertia, a property of objects that affects their motion. The experiments we carry out in studying inertia lead us to discover one of the most fundamental laws in physics—conservation of momentum.

4.1 Friction

Picture a block of wood sitting motionless on a smooth wooden surface. If you give the block a shove, it slides some distance but eventually comes to rest. Depending on the smoothness of the block and the smoothness of the wooden surface, this stopping may happen sooner or it may happen later. If the two surfaces in contact are very smooth and slippery, the block slides for a longer time interval than if the surfaces are rough or sticky. This you know from everyday experience: A hockey puck slides easily on ice but not on a rough road.

Figure 4.1 shows how the velocity of a wooden block decreases on three different surfaces. The slowing down is due to *friction*—the resistance to motion that one surface or object encounters when moving over another. Notice that, during the interval covered by the velocity-versus-time graph, the velocity decreases as the block slides over ice; it is hardly observable. The block slides easily over ice because there is very little friction between the two surfaces. The effect of friction is to bring two objects to rest with respect to each other—in this case the wooden block and the surface it is sliding on. The less friction there is, the longer it takes for the block to come to rest.

Figure 4.1 Velocity-versus-time graph for a wooden block sliding on three different surfaces. The rougher the surface, the more quickly the velocity decreases.



Figure 4.2 Low-friction track and carts used in the experiments described in this chapter.



You may wonder whether it is possible to make surfaces that have no friction at all, such that an object, once given a shove, continues to glide forever. There is no totally frictionless surface over which objects slide forever, but there are ways to minimize friction. You can, for instance, float an object on a cushion of air. This is most easily accomplished with a low-friction track—a track whose surface is dotted with little holes through which pressurized air blows. The air serves as a cushion on which a conveniently shaped object can float, with friction between the object and the track all but eliminated. Alternatively, one can use wheeled carts with low-friction bearings on an ordinary track. Figure 4.2 shows low-friction carts you may have encountered in your lab or class. Although there is still some friction both for low-friction tracks and for the track shown in Figure 4.2, this friction is so small that it can be ignored during an experiment. For example, if the track in Figure 4.2 is horizontal, carts move along its length without slowing down appreciably. In other words:

In the absence of friction, objects moving along a horizontal track keep moving without slowing down.

Another advantage of using such carts is that the track constrains the motion to being along a straight line. We can then use a high-speed camera to record the cart's position at various instants, and from that information determine its speed and acceleration.



4.1 (a) Are the accelerations of the motions shown in Figure 4.1 constant? (b) For which surface is the acceleration largest in magnitude?

No friction at all seems impossible. Isn't there always some friction in any real case?

76 CHAPTER 4 MOMENTUM

In the preceding two chapters, we developed a mathematical framework for describing motion along a straight line. In this chapter, we continue our study of motion by investigating inertia, a property of objects that affects their motion. The experiments we carry out in studying inertia lead us to discover one of the most fundamental laws in physics—conservation of momentum.

4.1 Friction

Picture a block of wood sitting motionless on a smooth wooden surface. If you give the block a shove, it slides some distance but eventually comes to rest. Depending on the smoothness of the block and the smoothness of the wooden surface, this stopping may happen sooner or it may happen later. If the two surfaces in contact are very smooth and slippery, the block slides for a longer time interval than if the surfaces are rough or sticky. This you know from everyday experience: A hockey puck slides easily on ice but not on a rough road.

Figure 4.1 shows how the velocity of a wooden block decreases on three different surfaces. The slowing down is due to *friction*—the resistance to motion that one surface or object encounters when moving over another. Notice that, during the interval covered by the velocity-versus-time graph, the velocity decrease as the block slides over ice is hardly observable. The block slides easily over ice because there is very little friction between the two surfaces. The effect of friction is to bring two objects to rest with respect to each other—in this case the wooden block and the surface it is sliding on. The less friction there is, the longer it takes for the block to come to rest.

Figure 4.2 Low-friction track and carts used in the experiments described in this chapter.



You may wonder whether it is possible to make surfaces that have no friction at all, such that an object, once given a shove, continues to glide forever. There is no totally frictionless surface over which objects slide forever, but there are ways to minimize friction. You can, for instance, float an object on a cushion of air. This is most easily accomplished with a low-friction track—a track whose surface is dotted with little holes through which pressurized air blows. The air serves as a cushion on which a conveniently shaped object can float, with friction between the object and the track all but eliminated. Alternatively, one can use wheeled carts with low-friction bearings on an ordinary track. Figure 4.2 shows low-friction carts you may have encountered in your lab or class. Although there is still some friction both for low-friction tracks and for the track shown in Figure 4.2, this friction is so small that it can be ignored during an experiment. For example, if the track in Figure 4.2 is horizontal, carts move along its length without slowing down appreciably. In other words:

In the absence of friction, objects moving along a horizontal track keep moving without slowing down.

Another advantage of using such carts is that the track constrains the motion to being along a straight line. We can then use a high-speed camera to record the cart's position at various instants, and from that information determine its speed and acceleration.



4.1 (a) Are the accelerations of the motions shown in Figure 4.1 constant? (b) For which surface is the acceleration largest in magnitude?

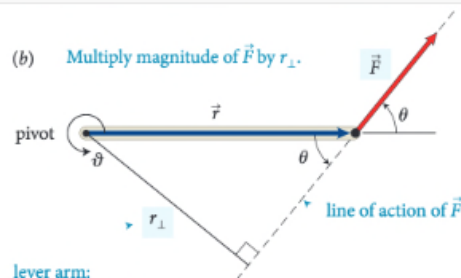
? No friction at all seems impossible. Isn't there always some friction in any real case.

Nov 1 4:41 pm



Enter your comment or question and press Enter



(b) Multiply magnitude of \vec{F} by r_{\perp} .

lever arm:
perpendicular distance
from line of action of force to rotation axis (pivot)

action of the force and the axis of rotation. So, the torque caused by a force exerted on an object is the product of the magnitude of the force and its lever arm distance. It can be written equivalently as rF_{\perp} and as $r_{\perp}F$.

Like other rotational quantities, torque carries a sign that depends on the choice of direction for increasing ϑ . In Figure 12.4, for example, the torque caused by \vec{F}_1 about the pivot tends to rotate the rod in the direction of increasing ϑ and so is positive; the torque caused by \vec{F}_2 is negative. The sum of the two torques about the pivot is then $r_1F_1 + (-r_2F_2)$. As we've seen, the two torques are equal in magnitude when the rod is balanced, and so the sum of the torques is zero. When the sum of the torques is not zero, the rod's rotational acceleration is nonzero, and so its rotational velocity and angular momentum change.

In the situations depicted in Figures 12.4 and 12.5 we used the pivot to calculate the lever arm distances. This is a natural choice because that is the point about which the object under consideration is free to rotate. However, torques also play a role for stationary objects that are suspended or supported at several different points and that are not free to rotate—for example, a plank or bridge supported at either end. To determine what reference point to use in such cases, complete the following exercise.

Exercise 12.1 Reference point

Consider again the rod in Figure 12.4. Calculate the sum of the torques about the left end of the rod.

SOLUTION I begin by making a sketch of the rod and the three forces exerted on it, showing their points of application on the rod (Figure 12.6).

reference point



The lever arm distances must now be determined relative to the left end of the rod. The lever arm distance of force \vec{F}_1 to this point is zero, and so the torque caused by that force about the left end of the rod is zero. If I choose counterclockwise as the positive direction of rotation, \vec{F}_2 causes a negative torque about the left end of the rod; the force \vec{F}_{pr} exerted by the pivot causes a positive torque about the left end of the rod. The lever arm distance of \vec{F}_2 about the left end of the rod is $r_1 + r_2$; that of \vec{F}_{pr} is r_1 . Because the rod is at rest, the magnitude of the force exerted by the pivot is equal to the sum of the forces \vec{F}_1 and \vec{F}_2 . Taking into account the signs of the torques, we find that the sum of the torques about the left end of the rod is $r_1(F_1 + F_2) - (r_1 + r_2)F_2 = r_1F_1 - r_2F_2$. This is the same result we obtained for the torques about the pivot, and so the sum of the torques about the left end is zero. ✓

Exercise 12.1 shows that the sum of the torques about the left end of the rod is zero, just like the sum of the torques about the pivot. You can repeat the calculation for the torques about the right end of the rod or any other point, and each time you will find that the sum of the torques is zero. The reason is that the rod is not rotating about any point, and so the sum of the torques must be zero about any point. In general we can say:

For a stationary object, the sum of the torques is zero.

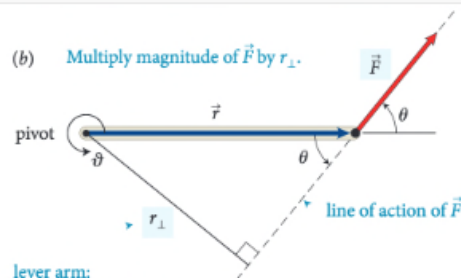
For a stationary object we can choose any reference point we like to calculate torques. It pays to choose a reference point that simplifies the calculation. As you have seen, we do not need to consider any force that is exerted at the reference point. So, by putting the reference point at the point of application of a force, we can eliminate that force from the calculation.



12.2 In the situation depicted in Figure 12.2a, you must continue to exert a force on the seesaw to keep the child off the ground. The force you exert causes a torque on the seesaw, and yet the seesaw's rotational acceleration is zero. How can this be if torques cause objects to accelerate rotationally?

Example 12.2 Torques on lever

Three forces are exerted on the lever of Figure 12.7. Forces \vec{F}_1 and \vec{F}_3 are equal in magnitude, and the magnitude of \vec{F}_2 is half as great. Force \vec{F}_1 is horizontal, \vec{F}_2 and \vec{F}_3 are vertical, and the lever makes an angle of 45° with the horizontal. Do these forces cause the lever to rotate about the pivot? If so, in which direction?

(b) Multiply magnitude of \vec{F} by r_{\perp} .

lever arm:
perpendicular distance
from line of action of force to rotation axis (pivot)

action of the force and the axis of rotation. So, the torque caused by a force exerted on an object is the product of the magnitude of the force and its lever arm distance. It can be

reference point



The lever arm distances must now be determined relative to the left end of the rod. The lever arm distance of force \vec{F}_1 to this point is zero, and so the torque caused by that force about the left end of the rod is zero. If I choose counterclockwise as the positive direction of rotation, \vec{F}_2 causes a negative torque about the left end of the rod; the force \vec{F}_{pr} exerted by the pivot causes a positive torque about the left end of the rod. The lever arm distance of \vec{F}_2 about the left end of the rod is $r_1 + r_2$; that of \vec{F}_{pr} is r_1 . Because the rod is at rest, the magnitude of the force exerted by the pivot is equal to the sum of the forces \vec{F}_1 and \vec{F}_2 . Taking into account the signs of the torques, we find that the sum of the torques about the left end of the rod is $r_1(F_1 + F_2) - (r_1 + r_2)F_2 = r_1F_1 - r_2F_2$. This is the same result we obtained for the torques about the pivot, and so the sum of the torques about the left end is zero. ✓

Exercise 12.1 shows that the sum of the torques about the left end of the rod is zero, just like the sum of the torques about the pivot. You can repeat the calculation for the torques about the right end of the rod or any other point, and each time you will find that the sum of the torques is zero. The reason is that the rod is not rotating about any point, and so the sum of the torques must be zero about any point. In general we can say:

For a stationary object, the sum of the torques is zero.

For a stationary object we can choose any reference point we like to calculate torques. It pays to choose a reference point that simplifies the calculation. As you have seen, we do not need to consider any force that is exerted at the reference point. So, by putting the reference point at the point of application of a force, we can eliminate that force from the calculation.



12.2 In the situation depicted in Figure 12.2a, you must continue to exert a force on the seesaw to keep the child off the ground. The force you exert causes a torque on the seesaw, and yet the seesaw's rotational acceleration is zero. How can this be if torques cause objects to accelerate rotationally?

Example 12.2 Torques on lever


Three forces are exerted on the lever of **Figure 12.7**. Forces \vec{F}_1 and \vec{F}_3 are equal in magnitude, and the magnitude of \vec{F}_2 is half as great. Force \vec{F}_1 is horizontal, \vec{F}_2 and \vec{F}_3 are vertical, and the lever makes an angle of 45° with the horizontal. Do these forces cause the lever to rotate about the pivot? If so, in which direction?

? I don't understand how this combination of factors tells you anything about direction? Aren't magnitude and lever arm distance both scalar quantities? It seems like we would need to know some sort of direction to calculate torque. Oct 20 12:09 am


? I think you may be able to think about the direction separately. So, after multiplying this magnitude and distance, you can attach a sign to the torque based on the defined parameters of the system. In the following paragraph, they start to explain how to choose this direction. Oct 20 12:38 am

? This is a great question. To further elaborate on this, we can think of this in terms of the Torque equation. The equation for torque is $\tau = r \times F$, with r being the level arm distance and F being force. We know that force is a vector from previous chapters, and in regards to " r " it can also be thought of as the radial vector. What this means is that this distance from the pivot points from the axis of rotation to the point where the force acts. In as previously mentioned, there is a general convention (the right-hand rule) that is used to determine the direction which happens to be perpendicular to both the radius from the axis and to the force. Oct 22 8:48 pm


Enter your comment or question and press Enter

 I don't understand how this combination of factors tells you anything about direction? Aren't magnitude and lever arm distance both scalar quantities? It seems like we would need to know some sort of direction to calculate torque.

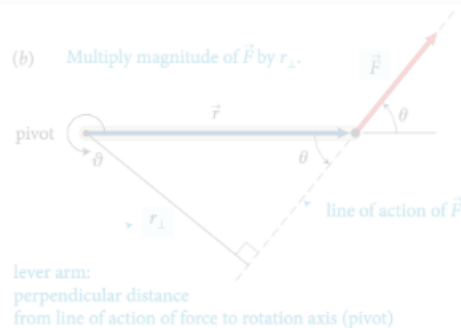
Oct 20 12:09 am

 I think you may be able to think about the direction separately. So, after multiplying this magnitude and distance, you can attach a sign to the torque based on the defined parameters of the system. In the following paragraph, they start to explain how to choose this direction.

Oct 20 12:38 am

 This is a great question. To further elaborate on this, we can think of this in terms of the Torque equation. The equation for torque is $\tau = r \times F$, with r being the level arm distance and F being force. We know that force is a vector from previous chapters, and in regards to " r " it can also be thought of as the radial vector. What this means is that this distance from the pivot points from the axis of rotation to the point where the force acts. In as previously mentioned, there is a general convention (the right-hand rule) that is used to determine the direction which happens to be perpendicular to both the radius from the axis and to the force.

Oct 22 8:48 pm



action of the force and the axis of rotation. So, the torque caused by a force exerted on an object is the product of the magnitude of the force and its lever arm distance. It can be

reference point

The lever arm distances must now be determined relative to the left end of the rod. The lever arm distance of force \vec{F}_1 to this point is zero, and so the torque caused by that force about the left end of the rod is zero. If I choose counterclockwise as the positive direction of rotation, \vec{F}_2 causes a negative torque about the left end of the rod; the force \vec{F}_{pr} exerted by the pivot causes a positive torque about the left end of the rod. The lever arm distance of \vec{F}_2 about the left end of the rod is $r_1 + r_2$; that of \vec{F}_{pr} is r_1 . Because the rod is at rest, the magnitude of the force exerted by the pivot is equal to the sum of the forces \vec{F}_1 and \vec{F}_2 . Taking into account the signs of the torques, we find that the sum of the torques about the left end of the rod is $r_1(F_1 + F_2) - (r_1 + r_2)F_2 = r_1F_1 - r_2F_2$. This is the same result we obtained for the torques about the pivot, and so the sum of the torques about the left end is zero. ✓

Exercise 12.1 shows that the sum of the torques about the left end of the rod is zero, just like the sum of the torques about the pivot. You can repeat the calculation for the right end of the rod and find the same result. The reason is that the rod is not rotating about any point, and so the sum of the torques must be zero about any point. In general we can say:

For a stationary object, the sum of the torques is zero.

For a stationary object we can choose any reference point we like to calculate torques. It pays to choose a reference point that simplifies the calculation. As you have seen, we do not need to consider any force that is exerted at the reference point. So, by putting the reference point at the point of application of a force, we can eliminate that force from the calculation.



12.2 In the situation depicted in Figure 12.2a, you must continue to exert a force on the seesaw to keep the child off the ground. The force you exert causes a torque on the seesaw, and yet the seesaw's rotational acceleration is zero. How can this be if torques cause objects to accelerate rotationally?

Example 12.2 Torques on lever

Three forces are exerted on the lever of Figure 12.7. Forces \vec{F}_1 and \vec{F}_2 are equal in magnitude, and the magnitude of \vec{F}_3 is half as great. Force \vec{F}_1 is horizontal, \vec{F}_2 and \vec{F}_3 are vertical, and the lever makes an angle of 45° with the horizontal. Do these forces cause the lever to rotate about the pivot? If so, in which direction?

how to get students to participate?

I don't understand how this combination of factors tells you the direction of the lever arm distance. I see you're talking about some sort of direction to calculate torque.

I think you may be able to think about the direction separately. So, after multiplying this magnitude and distance, you can attach a sign to the torque based on the defined parameters of the system. In the following paragraph, they start to explain how to choose this direction.

This is a great question. To further elaborate on this, we can think of this in terms of the Torque equation. The equation for torque is $\tau = r \times F$, with r being the level arm distance and F being force. We know that force is a vector from previous chapters, and in regards to " r " it can also be thought of as the radial vector. What this means is that this distance from the pivot points from the axis of rotation to the point where the force acts. In as previously mentioned, there is a general convention (the right-hand rule) that is used to determine the direction which happens to be perpendicular to both the radius from the axis and to the force.

Enter your comment or question and press Enter

On the very left, we see th...

It's interesting that the white ...

Is the reference frame i... 2

How does force affect ... 2

I was curious about this, t... 3

I understand partially w... 3

In this class, we always emp...

The part before this wa... 2

The extended free-body d... 4

This just means the net... 3

I don't understand why ... 3

It is important to note that... 2

The periods of when we ...

torque is the ability of a forc...

The type of diagram to use d...

It sounds like it is sayin... 3

So then do we have a p... 5

Since torque is the cross pro...

The right-hand rule can al... 3

I don't understand how ... 3

Orientation-based descriptio...

I don't really understand... 2

How small is small? As ... 3

I think it would be slightly ...

While I believe I underst... 3

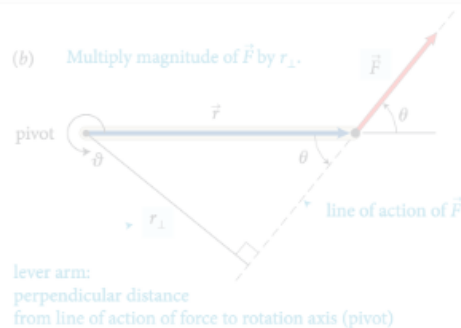
(a) The change in rotationa...

As we saw earlier in the chap...

Objects executing motion ar...

Generally, for rotating bod... 2

Does torque have the s... 3

(b) Multiply magnitude of \vec{F} by r_{\perp} .

action of the force and the axis of rotation. So, the torque caused by a force exerted on an object is the product of the magnitude of the force and the lever arm distance.

use combination of

intrinsic and extrinsic motivation drivers

I don't understand how this combination of factors tells you anything about direction? Aren't magnitude and lever arm distance both scalar quantities? It seems like we would need to know some sort of direction to calculate torque.

I think you may be able to think about the direction separately. So, after multiplying this magnitude and distance, you can attach a sign to the torque based on the defined parameters of the system. In the following paragraph, they start to explain how to choose this direction.

This is a great question. To further elaborate on this, we can think of this in terms of the Torque equation. The equation for torque is $\tau = r \times F$, with r being the level arm distance and F being force. We know that force is a vector vector from previous chapters, and in regards to " r " it can also be thought of as the radial vector. What this means is that this distance from the pivot points from the axis of rotation to the point where the force acts. In as previously mentioned, there is a general convention (the right-hand rule) that is used to determine the direction which happens to be perpendicular to both the radius from the axis and to the force.

Enter your comment or question and press Enter

reference point

The lever arm distances must now be determined relative to the left end of the rod. The lever arm distance of force \vec{F}_1 to this point is zero, and so the torque caused by that force about the left end of the rod is zero. If I choose counterclockwise as the positive direction of rotation, \vec{F}_2 causes a negative torque about the left end of the rod; the force \vec{F}_{pr} exerted by the pivot causes a positive torque about the left end of the rod. The lever arm distance of \vec{F}_2 about the left end of the rod is $r_1 + r_2$; that of \vec{F}_{pr} is r_1 . Because the rod is at rest, the magnitude of the force exerted by the pivot is equal to the sum of the forces \vec{F}_1 and \vec{F}_2 . Taking into account the signs of the torques, we find that the sum of the torques about the left end of the rod is $r_1(F_1 + F_2) - (r_1 + r_2)F_2 = r_1F_1 - r_2F_2$. This is the same result we obtained for the torques about the pivot, and so the sum of the torques about the left end is zero. ✓

For a stationary object, the sum of the torques is zero. The reason is that the rod is not rotating about any point, and so the sum of the torques about any point must be zero. This is a general result that can be used to check the consistency of a calculation.

For a stationary object, the sum of the torques is zero.

For a stationary object we can choose any reference point we like to calculate torques. It pays to choose a reference point that simplifies the calculation. As you have seen, we do not need to consider any force that is exerted at the reference point. So, by putting the reference point at the point of application of a force, we can eliminate that force from the calculation.



12.2 In the situation depicted in Figure 12.2a, you must continue to exert a force on the seesaw to keep the child off the ground. The force you exert causes a torque on the seesaw, and yet the seesaw's rotational acceleration is zero. How can this be if torques cause objects to accelerate rotationally?

Example 12.2 Torques on lever

Three forces are exerted on the lever of Figure 12.7. Forces \vec{F}_1 and \vec{F}_2 are equal in magnitude, and the magnitude of \vec{F}_3 is half as great. Force \vec{F}_1 is horizontal, \vec{F}_2 and \vec{F}_3 are vertical, and the lever makes an angle of 45° with the horizontal. Do these forces cause the lever to rotate about the pivot? If so, in which direction?

On the very left, we see th...

It's interesting that the white ...

Is the reference frame i... 2

How does force affect ... 2

I was curious about this, t... 3

I understand partially w... 3

In this class, we always emp...

The part before this wa... 2

The extended free-body d... 4

This just means the net... 3

I don't understand why ... 3

It is important to note that... 2

This reminds me of when we ...

Torque is the ability of a forc...

It sounds like it is sayin... 3

So then do we have a p... 5

Since torque is the cross pro...

The right-hand rule can al... 3

I don't understand how ... 3

Orientation-based descriptio...

I don't really understand... 2

How small is small? As ... 3

I think it would be slightly ...

While I believe I underst... 3

(a) The change in rotationa...

As we saw earlier in the chap...

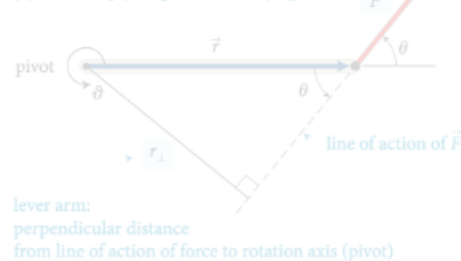
Objects executing motion ar...

Generally, for rotating bod... 2

Does torque have the s... 3

rubric-based assessment

(b) Multiply magnitude of \vec{F} by r_{\perp} .



lever arm:
perpendicular distance
from line of action of force to rotation axis (pivot)

action of the force and the axis of rotation. So, the torque caused by a force exerted on an object is the product of the magnitude of the force and its lever arm distance. It can be

The lever arm distances must now be determined relative to the left end of the rod. The lever arm distance of force \vec{F}_1 to this point is zero, and so the torque caused by that force about the left end of the rod is zero. If I choose counterclockwise as the positive direction of rotation, \vec{F}_2 causes a negative torque about the left end of the rod; the force \vec{F}_{pr} exerted by the pivot causes a positive torque about the left end of the rod. The lever arm distance of \vec{F}_2 about the left end of the rod is $r_1 + r_2$; that of \vec{F}_{pr} is r_1 . Because the rod is at rest, the magnitude of the force exerted by the pivot is equal to the sum of the forces \vec{F}_1 and \vec{F}_2 . Taking into account the signs, the torque balance equation is $r_1(F_1 + F_2) - (r_1 + r_2)F_2 = r_1F_1 - r_2F_2$. This is the same result we obtained for the torques about the pivot, and so the sum of the torques about the left end is zero. ✓

Exercise 12.1 shows that the sum of the torques about the left end of the rod is zero, just like the sum of the torques about the pivot. You can repeat the calculation for the torques about the right end of the rod or any other point, and each time you will find that the sum of the torques is zero. The reason is that the rod is not rotating about any point, and so the sum of the torques must be zero about any point. In general we can say:

For a stationary object, the sum of the torques is zero.

For a stationary object we can choose any reference point we like to calculate torques. It pays to choose a reference point that simplifies the calculation. As you have seen, we do not need to consider any force that is exerted at the reference point. So, by putting the reference point at the point of application of a force, we can eliminate that force from the calculation.



12.2 In the situation depicted in Figure 12.2a, you must continue to exert a force on the seesaw to keep the child off the ground. The force you exert causes a torque on the seesaw, and yet the seesaw's rotational acceleration is zero. How can this be if torques cause objects to accelerate rotationally?

Example 12.2 Torques on lever

Three forces are exerted on the lever of Figure 12.7. Forces \vec{F}_1 and \vec{F}_2 are equal in magnitude, and the magnitude of \vec{F}_3 is half as great. Force \vec{F}_1 is horizontal, \vec{F}_2 and \vec{F}_3 are vertical, and the lever makes an angle of 45° with the horizontal. Do these forces cause the lever to rotate about the pivot? If so, in which direction?

On the very left, we see th...

It's interesting that the white ...

Is the reference frame i... 2

How does force affect ... 2

I was curious about this, t... 3

I understand partially w... 3

In this class, we always emp...

this wa... 2

The extended free-body d... 4

This just means the net... 3

I don't understand why ... 3

It is important to note that... 2

This reminds me of when we ...

Torque is the ability of a forc...

The type of diagram to use d...

It sounds like it is sayin... 3

So then do we have a p... 5

Since torque is the cross pro...

The right-hand rule can al... 3

I don't understand how ... 3

Orientation-based descriptio...

I don't really understand... 2

How small is small? As ... 3

I think it would be slightly ...

While I believe I underst... 3

(a) The change in rotationa...

As we saw earlier in the chap...

Objects executing motion ar...

Generally, for rotating bod... 2

Does torque have the s... 3

I don't understand how this combination of factors tells you anything about direction? Aren't magnitude and lever arm distance both scalar quantities? It seems like we would need to know some sort of direction to calculate torque. Oct 20 12:09 am

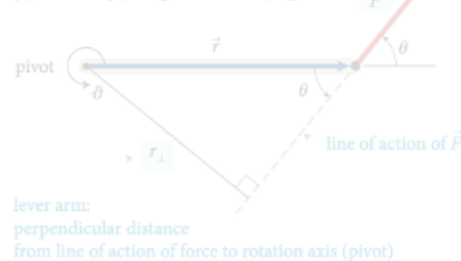
I think you may be able to think about the direction separately. So, after multiplying this magnitude and distance, you can attach a sign to the torque based on the defined parameters of the system. In the following paragraph, they start to explain how to choose this direction. Oct 20 12:38 am

This is a great question. To further elaborate on this, we can think of this in terms of the Torque equation. The equation for torque is $\tau = r \times F$, with r being the level arm distance and F being force. We know that force is a vector vector from previous chapters, and in regards to " r " it can also be thought of as the radial vector. What this means is that this distance from the pivot points from the axis of rotation to the point where the force acts. In as previously mentioned, there is a general convention (the right-hand rule) that is used to determine the direction which happens to be perpendicular to both the radius from the axis and to the force. Oct 22 8:48 pm

Enter your comment or question and press Enter

rubric-based assessment

(b) Multiply magnitude of \vec{F} by r_{\perp} .



action of the force and the axis of rotation. So, the torque caused by a force exerted on an object is the product of the magnitude of the force and its lever arm distance. It can be

The lever arm distances must now be determined relative to the left end of the rod. The lever arm distance of force \vec{F}_1 to this point is zero, and so the torque caused by that force about the left end of the rod is zero. If I choose counterclockwise as the positive direction of rotation, \vec{F}_2 causes a negative torque about the left end of the rod; the force \vec{F}_{pr} exerted by the pivot causes a positive torque about the left end of the rod. The lever arm distance of \vec{F}_2 about the left end of the rod is $r_1 + r_2$; that of \vec{F}_{pr} is r_1 . Because the rod is at rest, the magnitude of the force exerted by the pivot is equal to the sum of the forces \vec{F}_1 and \vec{F}_2 . Taking into account the signs, the equation we find is $r_1(F_1 + F_2) - (r_1 + r_2)F_2 = r_1F_1 - r_2F_2$. This is the same result we obtained for the torques about the pivot, and so the sum of the torques about the left end is zero. ✓

Exercise 12.1 shows that the sum of the torques about the left end of the rod is zero, just like the sum of the torques about the pivot. You can repeat the calculation for the torques about the right end of the rod or any other point, and each time you will find that the sum of the torques is zero. The reason is that the rod is not rotating about any point, and so the sum of the torques must be zero about any point. In general we can say:

For a stationary object, the sum of the torques is zero.

For a stationary object we can choose any reference point we like to calculate torques. It pays to choose a reference point that simplifies the calculation. As you have seen, we do not need to consider any force that is exerted at the reference point. So, by putting the reference point at the point of application of a force, we can eliminate that force from the calculation.



12.2 In the situation depicted in Figure 12.2a, you must continue to exert a force on the seesaw to keep the child off the ground. The force you exert causes a torque on the seesaw, and yet the seesaw's rotational acceleration is zero. How can this be if torques cause objects to accelerate rotationally?

Example 12.2 Torques on lever

Three forces are exerted on the lever of Figure 12.7. Forces \vec{F}_1 and \vec{F}_2 are equal in magnitude, and the magnitude of \vec{F}_3 is half as great. Force \vec{F}_1 is horizontal, \vec{F}_2 and \vec{F}_3 are vertical, and the lever makes an angle of 45° with the horizontal. Do these forces cause the lever to rotate about the pivot? If so, in which direction?

must demonstrate thoughtful reading & interpretation

- quantity (10–20)

I don't understand how this combination of factors tells you anything about direction? Aren't magnitude and lever arm distance both scalar quantities? It seems like we would need to know some sort of direction to calculate torque.

I think you may be able to think about the direction separately. So, after multiplying this magnitude and distance, you can attach a sign to the torque based on the defined parameters of the system. In the following paragraph, they start to explain how to choose this direction.

This is a great question. To further elaborate on this, we can think of this in terms of the Torque equation. The equation for torque is $\tau = r \times F$, with r being the level arm distance and F being force. We know that force is a vector vector from previous chapters, and in regards to "r" it can also be thought of as the radial vector. What this means is that this distance from the pivot points from the axis of rotation to the point where the force acts. In as previously mentioned, there is a general convention (the right-hand rule) that is used to determine the direction which happens to be perpendicular to both the radius from the axis and to the force.

Enter your comment or question and press Enter

On the very left, we see th...

It's interesting that the white ...

Is the reference frame i... 2

How does force affect ... 2

I was curious about this, t... 3

I understand partially w... 3

In this class, we always emp...

this wa... 2

The extended free-body d... 4

This just means the net... 3

I don't understand why ... 3

It is important to note that... 2

This reminds me of when we ...

Torque is the ability of a forc...

The type of diagram to use d...

It sounds like it is sayin... 3

So then do we have a p... 5

Since torque is the cross pro...

The right-hand rule can al... 3

I don't understand how ... 3

Orientation-based descriptio...

I don't really understand... 2

How small is small? As ... 3

I think it would be slightly ...

While I believe I underst... 3

(a) The change in rotationa...

As we saw earlier in the chap...

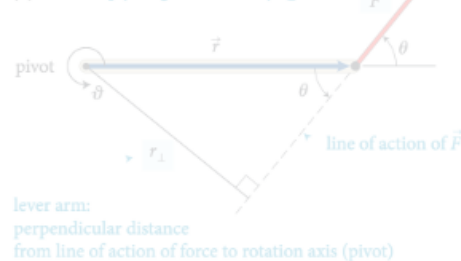
Objects executing motion ar...

Generally, for rotating bod... 2

Does torque have the s... 3

rubric-based assessment

(b) Multiply magnitude of \vec{F} by r_{\perp} .



action of the force and the axis of rotation. So, the torque caused by a force exerted on an object is the product of the magnitude of the force and its lever arm distance. It can be

The lever arm distances must now be determined relative to the left end of the rod. The lever arm distance of force \vec{F}_1 to this point is zero, and so the torque caused by that force about the left end of the rod is zero. If I choose counterclockwise as the positive direction of rotation, \vec{F}_2 causes a negative torque about the left end of the rod; the force \vec{F}_{pr} exerted by the pivot causes a positive torque about the left end of the rod. The lever arm distance of \vec{F}_2 about the left end of the rod is $r_1 + r_2$; that of \vec{F}_{pr} is r_1 . Because the rod is at rest, the magnitude of the force exerted by the pivot is equal to the sum of the forces \vec{F}_1 and \vec{F}_2 . Taking into account the signs, the torque sum is $r_1(F_1 + F_2) - (r_1 + r_2)F_2 = r_1F_1 - r_2F_2$. This is the same result we obtained for the torques about the pivot, and so the sum of the torques about the left end is zero. ✓

Exercise 12.1 shows that the sum of the torques about the left end of the rod is zero, just like the sum of the torques about the pivot. You can repeat the calculation for the torques about the right end of the rod or any other point, and each time you will find that the sum of the torques is zero. The reason is that the rod is not rotating about any point, and so the sum of the torques must be zero about any point. In general we can say:

For a stationary object, the sum of the torques is zero.

For a stationary object we can choose any reference point we like to calculate torques. It pays to choose a reference point that simplifies the calculation. As you have seen, we do not need to consider any force that is exerted at the reference point. So, by putting the reference point at the point of application of a force, we can eliminate that force from the calculation.



12.2 In the situation depicted in Figure 12.2a, you must continue to exert a force on the seesaw to keep the child off the ground. The force you exert causes a torque on the seesaw, and yet the seesaw's rotational acceleration is zero. How can this be if torques cause objects to accelerate rotationally?

Example 12.2 Torques on lever

Three forces are exerted on the lever of Figure 12.7. Forces \vec{F}_1 and \vec{F}_2 are equal in magnitude, and the magnitude of \vec{F}_3 is half as great. Force \vec{F}_1 is horizontal, \vec{F}_2 and \vec{F}_3 are vertical, and the lever makes an angle of 45° with the horizontal. Do these forces cause the lever to rotate about the pivot? If so, in which direction?

must demonstrate thoughtful reading & interpretation

- quantity (10–20)

- timeliness (before class)

I don't understand how this combination of factors tells you anything about direction? Aren't magnitude and lever arm distance both scalar quantities? It seems like we would need to know some sort of direction to calculate torque.

I think you may be able to think about the direction separately. So, after multiplying the distance, you can attach a sign to the torque based on the defined parameters of the system. In the following paragraph, they start to explain how to choose this direction.

This is a great question. To further elaborate on this, we can think of this in terms of the Torque equation. The equation for torque is $\tau = r \times F$, with r being the level arm distance and F being force. We know that force is a vector vector from previous chapters, and in regards to "r" it can also be thought of as the radial vector. What this means is that this distance from the pivot points from the axis of rotation to the point where the force acts. In as previously mentioned, there is a general convention (the right-hand rule) that is used to determine the direction which happens to be perpendicular to both the radius from the axis and to the force.

Enter your comment or question and press Enter

On the very left, we see th...

It's interesting that the white ...

Is the reference frame i... 2

How does force affect ... 2

I was curious about this, t... 3

I understand partially w... 3

In this class, we always emp...

this wa... 2

The extended free-body d... 4

This just means the net... 3

I don't understand why ... 3

It is important to note that... 2

This reminds me of when we ...

Torque is the ability of a forc...

The type of diagram to use d...

It sounds like it is sayin... 3

So then do we have a p... 5

Since torque is the cross pro...

The right-hand rule can al... 3

I don't understand how ... 3

Orientation-based descriptio...

I don't really understand... 2

How small is small? As ... 3

I think it would be slightly ...

While I believe I underst... 3

(a) The change in rotationa...

As we saw earlier in the chap...

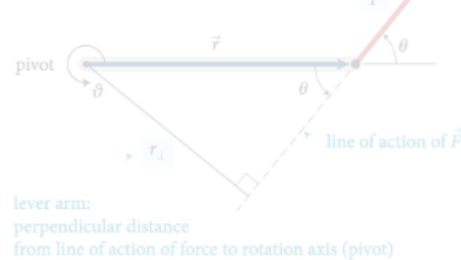
Objects executing motion ar...

Generally, for rotating bod... 2

Does torque have the s... 3

rubric-based assessment

(b) Multiply magnitude of \vec{F} by r_{\perp} .



action of the force and the axis of rotation. So, the torque caused by a force exerted on an object is the product of the magnitude of the force and its lever arm distance. It can be

The lever arm distances must now be determined relative to the left end of the rod. The lever arm distance of force \vec{F}_1 to this point is zero, and so the torque caused by that force about the left end of the rod is zero. If I choose counterclockwise as the positive direction of rotation, \vec{F}_2 causes a negative torque about the left end of the rod; the force \vec{F}_{pr} exerted by the pivot causes a positive torque about the left end of the rod. The lever arm distance of \vec{F}_2 about the left end of the rod is $r_1 + r_2$; that of \vec{F}_{pr} is r_1 . Because the rod is at rest, the magnitude of the force exerted by the pivot is equal to the sum of the forces \vec{F}_1 and \vec{F}_2 . Taking into account the signs, the torque sum is $r_1(F_1 + F_2) - (r_1 + r_2)F_2 = r_1F_1 - r_2F_2$. This is the same result we obtained for the torques about the pivot, and so the sum of the torques about the left end is zero. ✓

Exercise 12.1 shows that the sum of the torques about the left end of the rod is zero, just like the sum of the torques about the pivot. You can repeat the calculation for the torques about the right end of the rod or any other point, and each time you will find that the sum of the torques is zero. The reason is that the rod is not rotating about any point, and so the sum of the torques must be zero about any point. In general we can say:

For a stationary object, the sum of the torques is zero.

For a stationary object we can choose any reference point we like to calculate torques. It pays to choose a reference point that simplifies the calculation. As you have seen, we do not need to consider any force that is exerted at the reference point. So, by putting the reference point at the point where a force is exerted, we can eliminate that force from the calculation.



12.2 In the situation depicted in Figure 12.2a, you must continue to exert a force on the seesaw to keep the child off the ground. The force you exert causes a torque on the seesaw, and yet the seesaw's rotational acceleration is zero. How can this be if torques cause objects to accelerate rotationally?

Example 12.2 Torques on lever

Three forces are exerted on the lever of Figure 12.7. Forces \vec{F}_1 and \vec{F}_2 are equal in magnitude, and the magnitude of \vec{F}_3 is half as great. Force \vec{F}_1 is horizontal, \vec{F}_2 and \vec{F}_3 are vertical, and the lever makes an angle of 45° with the horizontal. Do these forces cause the lever to rotate about the pivot? If so, in which direction?

must demonstrate thoughtful reading & interpretation

- quantity (10–20)

- timeliness (before class)

- distribution (not clustered)

I don't understand how this comment factors tells you anything about direction? Aren't magnitude and lever arm distance both scalar quantities? It seems like we would need to know some sort of direction to calculate torque.

I think you may be able to think about the direction separately. So, after multiplying the distance, you can attach a sign to the torque based on the defined parameters of the system. In the following paragraph, they start to explain how to choose this direction.

This is a great question. To further elaborate on this, you can think of this in terms of the Torque equation. The equation for torque is $\tau = r \times F$, with r being the level arm distance and F being force. We know that force is a vector vector from previous chapters, and in regards to "r" it can also be thought of as the radial vector. What this means is that this distance from the pivot points from the axis of rotation to the point where the force acts. In as previously mentioned, there is a general convention (the right-hand rule) that is used to determine the direction which happens to be perpendicular to both the radius from the axis and to the force.

Enter your comment or question and press Enter

On the very left, we see th...

It's interesting that the white ...

Is the reference frame i... 2

How does force affect ... 2

I was curious about this, t... 3

I understand partially w... 3

In this class, we always emp...

this wa... 2

The extended free-body d... 4

This just means the net... 3

I don't understand why ... 3

It is important to note that... 2

This reminds me of when we ...

Torque is the ability of a forc...

The type of diagram to use d...

It sounds like it is sayin... 3

So then do we have a p... 5

Since torque is the cross pro...

The right-hand rule can al... 3

I don't understand how ... 3

Orientation-based descriptio...

I don't really understand... 2

How small is small? As ... 3

I think it would be slightly ...

While I believe I underst... 3

(a) The change in rotationa...

As we saw earlier in the chap...

Objects executing motion ar...

Generally, for rotating bod... 2

Does torque have the s... 3

rubric-based assessment

(b) Multiply magnitude of \vec{F} by r_{\perp} .



lever arm:
perpendicular distance
from line of action of force to rotation axis (pivot)

- quality (thoughtful reading & interpretation)

- quantity (minimum)

- timeliness (before class)

- distribution (not clustered)

Understand the concept of torque. Aren't you supposed to be able to calculate the magnitude and direction of the torque? Aren't you supposed to be able to calculate the magnitude and direction of the torque?

Work may be done by the torque. So, the torque is the product of the magnitude of the force and the lever arm distance. It can be calculated by the magnitude of the force and the lever arm distance.

This is a great question. To further understand torque, you can think of this in terms of the lever arm distance. The lever arm distance is the perpendicular distance from the line of action of the force to the pivot point. The lever arm distance is the perpendicular distance from the line of action of the force to the pivot point. The lever arm distance is the perpendicular distance from the line of action of the force to the pivot point.

Enter your comment or question and press Enter

The lever arm distances must now be determined relative to the left end of the rod. The lever arm distance of force \vec{F}_1 about the left end of the rod is zero, and so the torque caused by this force about the left end of the rod is zero. If I choose the right end of the rod as the pivot, the lever arm distance of force \vec{F}_1 about the right end of the rod is r_1 , and the torque caused by this force about the right end of the rod is $\tau_1 = r_1 F_1$. The lever arm distance of force \vec{F}_2 about the right end of the rod is r_2 , and the torque caused by this force about the right end of the rod is $\tau_2 = r_2 F_2$. The lever arm distance of force \vec{F}_3 about the right end of the rod is r_3 , and the torque caused by this force about the right end of the rod is $\tau_3 = r_3 F_3$. The lever arm distance of force \vec{F}_4 about the right end of the rod is r_4 , and the torque caused by this force about the right end of the rod is $\tau_4 = r_4 F_4$. The lever arm distance of force \vec{F}_5 about the right end of the rod is r_5 , and the torque caused by this force about the right end of the rod is $\tau_5 = r_5 F_5$. The lever arm distance of force \vec{F}_6 about the right end of the rod is r_6 , and the torque caused by this force about the right end of the rod is $\tau_6 = r_6 F_6$. The lever arm distance of force \vec{F}_7 about the right end of the rod is r_7 , and the torque caused by this force about the right end of the rod is $\tau_7 = r_7 F_7$. The lever arm distance of force \vec{F}_8 about the right end of the rod is r_8 , and the torque caused by this force about the right end of the rod is $\tau_8 = r_8 F_8$. The lever arm distance of force \vec{F}_9 about the right end of the rod is r_9 , and the torque caused by this force about the right end of the rod is $\tau_9 = r_9 F_9$. The lever arm distance of force \vec{F}_{10} about the right end of the rod is r_{10} , and the torque caused by this force about the right end of the rod is $\tau_{10} = r_{10} F_{10}$.

Example 12.2 Torques on lever

Three forces are exerted on the lever of Figure 12.7. Forces \vec{F}_1 and \vec{F}_2 are equal in magnitude, and the magnitude of \vec{F}_3 is half as great. Force \vec{F}_1 is horizontal, \vec{F}_2 and \vec{F}_3 are vertical, and the lever makes an angle of 45° with the horizontal. Do these forces cause the lever to rotate about the pivot? If so, in which direction?

Example 12.2 Torques on lever

Three forces are exerted on the lever of Figure 12.7. Forces \vec{F}_1 and \vec{F}_2 are equal in magnitude, and the magnitude of \vec{F}_3 is half as great. Force \vec{F}_1 is horizontal, \vec{F}_2 and \vec{F}_3 are vertical, and the lever makes an angle of 45° with the horizontal. Do these forces cause the lever to rotate about the pivot? If so, in which direction?

- quantity (minimum)
 - timeliness (before class)
 - distribution (not clustered)
- Understand the concept of torque. Aren't you supposed to be able to calculate the magnitude and direction of the torque? Aren't you supposed to be able to calculate the magnitude and direction of the torque?
- Work may be done by the torque. So, the torque is the product of the magnitude of the force and the lever arm distance. It can be calculated by the magnitude of the force and the lever arm distance.
- This is a great question. To further understand torque, you can think of this in terms of the lever arm distance. The lever arm distance is the perpendicular distance from the line of action of the force to the pivot point. The lever arm distance is the perpendicular distance from the line of action of the force to the pivot point. The lever arm distance is the perpendicular distance from the line of action of the force to the pivot point.
- Example 12.2 Torques on lever
- Three forces are exerted on the lever of Figure 12.7. Forces \vec{F}_1 and \vec{F}_2 are equal in magnitude, and the magnitude of \vec{F}_3 is half as great. Force \vec{F}_1 is horizontal, \vec{F}_2 and \vec{F}_3 are vertical, and the lever makes an angle of 45° with the horizontal. Do these forces cause the lever to rotate about the pivot? If so, in which direction?
- Example 12.2 Torques on lever
- Three forces are exerted on the lever of Figure 12.7. Forces \vec{F}_1 and \vec{F}_2 are equal in magnitude, and the magnitude of \vec{F}_3 is half as great. Force \vec{F}_1 is horizontal, \vec{F}_2 and \vec{F}_3 are vertical, and the lever makes an angle of 45° with the horizontal. Do these forces cause the lever to rotate about the pivot? If so, in which direction?

rubric-based assessment

(b) Multiply magnitude of \vec{F} by r_{\perp} .



lever arm:
perpendicular distance
from line of action of force to rotation axis (pivot)

- quality (thoughtful reading & interpretation)

action of the force and the axis of rotation. So, the torque caused by a force exerted on an object is the product of the magnitude of the force and its lever arm distance. It can be

The lever arm distances must now be determined relative to the left end of the rod. The lever arm distance of force \vec{F}_1 to this point is zero, and so the torque caused by that force about the left end of the rod is zero. If I choose counterclockwise as the positive direction of rotation, \vec{F}_2 causes a negative torque about the left end of the rod; the force \vec{F}_{pr} exerted by the pivot causes a positive torque about the left end of the rod. The lever arm distance of \vec{F}_2 about the left end of the rod is $r_1 + r_2$; that of \vec{F}_{pr} is r_1 . Because the rod is at rest, the magnitude of the force exerted by the pivot is equal to the sum of the forces \vec{F}_1 and \vec{F}_2 . Taking into account the signs of the torques, we find that $r_1(F_1 + F_2) - (r_1 + r_2)F_2 = r_1F_1 - r_2F_2$. This is the same result we obtained for the torques about the pivot, and so the sum of the torques about the left end is zero. ✓

Exercise 12.1 shows that the sum of the torques about the left end of the rod is zero, just like the sum of the torques about the pivot. In general, for any stationary object, the sum of the torques is zero. For a stationary object we can choose any reference point we like to calculate torques. It pays to choose a reference point that simplifies the calculation. As you have seen, we do not need to consider any force that is exerted at the reference point. So, by putting the reference point at the point where a force is exerted on the object, we can eliminate that force from the calculation.

In general, for any stationary object, the sum of the torques is zero.

For a stationary object we can choose any reference point we like to calculate torques. It pays to choose a reference point that simplifies the calculation. As you have seen, we do not need to consider any force that is exerted at the reference point. So, by putting the reference point at the point where a force is exerted on the object, we can eliminate that force from the calculation.



12.2 In the situation depicted in Figure 12.2a, you must continue to exert a force on the seesaw to keep the child off the ground. The force you exert causes a torque on the seesaw, and yet the seesaw's rotational acceleration is zero. How can this be if torques cause objects to accelerate rotationally?

Example 12.2 Torques on lever

Three forces are exerted on the lever of Figure 12.7. Forces \vec{F}_1 and \vec{F}_2 are equal in magnitude, and the magnitude of \vec{F}_3 is half as great. Force \vec{F}_1 is horizontal, \vec{F}_2 and \vec{F}_3 are vertical, and the lever makes an angle of 45° with the horizontal. Do these forces cause the lever to rotate about the pivot? If so, in which direction?

how do you process all of that??

- timeliness (before class)

- distribution (not clustered)

On the very left, we see th...

It's interesting that the white ...

Is the reference frame i... 2

How does force affect ... 2

I was curious about this, t... 3

I understand partially w... 3

In this class, we always emp...

before this wa... 2

The extended free-body d... 4

This just means the net... 3

I don't understand why ... 3

is important to the th...

this means that when we...

Torque is the ability of a forc...

The type of diagram to use d...

It sounds like it is sayin... 3

So then do we have a p... 5

Since torque is the cross pro...

The right-hand rule can al... 3

I don't understand how ... 3

Orientation-based descriptio...

I don't really understand... 2

How small is small? As ... 3

I think it would be slightly ...

While I believe I underst... 3

(a) The change in rotationa...

As we saw earlier in the chap...

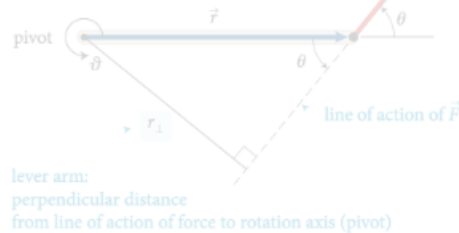
Objects executing motion ar...

Generally, for rotating bod... 2

Does torque have the s... 3

rubric-based assessment

(b) Multiply magnitude of \vec{F} by r_{\perp} .



- quality (though future research interpretation)

on of the force and the axis of rotation. The torque exerted on an object by a force is the product of the magnitude of the force and its lever arm.

Exercise 12.1 shows that the sum of the torques about the left end of the rod is zero, just like the sum of the torques about the right end.

- you process all of that??

For a static equilibrium problem, you must choose a reference point to calculate the torques. As you have seen, we do not need to consider any force that is exerted at the reference point. So, by putting the reference point at the point where a force is exerted, we can eliminate that force from the calculation.

- timeliness (before class)

For a static equilibrium problem, you must choose a reference point to calculate the torques. As you have seen, we do not need to consider any force that is exerted at the reference point. So, by putting the reference point at the point where a force is exerted, we can eliminate that force from the calculation.

- distribution (not clustered)

This is a great question. To find the torque, you can think of this in terms of the torque equation $\tau = r \times F$, with r being the lever arm distance and F being the force. We know that force is a vector, and in chapters, and in regards to "r" it can also be thought of as a radial vector. What this means is that this distance from the pivot points from the axis of rotation to the point where the force acts. In as previously mentioned, there is a general convention (the right-hand rule) that is used to determine the direction which happens to be perpendicular to both the radius from the axis and to the force.

Example 12.2 Torques on lever
Three forces are exerted on the lever of Figure 12.7. Forces \vec{F}_1 and \vec{F}_2 are equal in magnitude, and the magnitude of \vec{F}_3 is half as great. Force \vec{F}_1 is horizontal, \vec{F}_2 and \vec{F}_3 are vertical, and the lever makes an angle of 45° with the horizontal. Do these forces cause the lever to rotate about the pivot? If so, in which direction?

On the very last we see th...

It's interesting to see white ...

So then do we have a p...

Since torque is the cross pro...

The right-hand rule can al...

I don't understand how ...

Orientation-based descriptio...

I don't really understand...

How small is small? As ...

I think it would be slightly ...

While I believe I underst...

(a) The change in rotationa...

As we saw earlier in the chap...

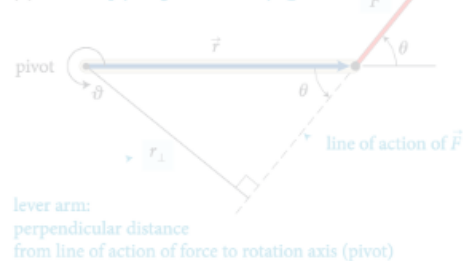
Objects executing motion ar...

Generally, for rotating bod...

Does torque have the s...

fully automated assessment

(b) Multiply magnitude of \vec{F} by r_{\perp} .



- specialized machine learning algorithm
- assesses intellectual content
- exceeds intercoder reliability

I don't understand how this combination of factors tells you anything about direction? Aren't magnitude and lever arm distance both scalar quantities? It seems like you would have to know some sort of direction to calculate torque.

I think you may be able to think about the direction separately. So, after multiplying this magnitude and distance, you can attach a sign to the torque based on the defined parameters of the system. The question is, how do you explain how to choose the sign?

This is a great question. To further elaborate on this, we can think of this in terms of the Torque equation. The equation for torque is $\tau = r \times F$, with r being the level arm distance and F being force. We know that force is a vector vector from previous chapters, and in regards to " r " it can also be thought of as the radial vector. What this means is that this distance from the pivot points from the axis of rotation to the point where the force acts. In as previously mentioned, there is a general convention (the right-hand rule) that is used to determine the direction which happens to be perpendicular to both the radius from the axis and to the force.

Enter your comment or question and press Enter

The lever arm distances must now be determined relative to the left end of the rod. The lever arm distance of force \vec{F}_1 to this point is zero, and so the torque caused by that force about the left end of the rod is zero. If I choose counterclockwise as the positive direction of rotation, \vec{F}_2 causes a negative torque about the left end of the rod; the force \vec{F}_{pr} exerted by the pivot causes a positive torque about the left end of the rod. The lever arm distance of \vec{F}_2 about the left end of the rod is $r_1 + r_2$; that of \vec{F}_{pr} is r_1 . Because the rod is at rest, the magnitude of the force exerted by the pivot is equal to the sum of the forces \vec{F}_1 and \vec{F}_2 . Taking into account the signs of the torques, we find that the sum of the torques about the left end of the rod is $r_1(F_1 + F_2) - (r_1 + r_2)F_2 = r_1F_1 - r_2F_2$. This is the same result we obtained for the torques about the pivot, and so the sum of the torques about any point is zero.

Exercise 12.1 shows that the sum of the torques about the left end of the rod is zero, just like the sum of the torques about the pivot. You can repeat the calculation for the torques about the right end of the rod or any other point, and one time you will find that the sum of the torques is zero. The result is that the sum of the torques about any point, and so the sum of the torques must be zero about any point. In general we can say:

For a stationary object, the sum of the torques is zero.

For a stationary object we can choose any reference point. We like to choose the pivot as a reference point, but that is not the only choice. As you have seen, we do not need to consider any force that is exerted at the reference point. So, by putting the reference point at the point of application of a force, we can eliminate that force from the calculation.



12.2 In the situation depicted in Figure 12.2a, you must continue to exert a force on the seesaw to keep the child off the ground. The force you exert causes a torque on the seesaw, and yet the seesaw's rotational acceleration is zero. How can this be if torques cause objects to accelerate rotationally?

Example 12.2 Torques on lever

Three forces are exerted on the lever of Figure 12.7. Forces \vec{F}_1 and \vec{F}_2 are equal in magnitude, and the magnitude of \vec{F}_3 is half as great. Force \vec{F}_1 is horizontal, \vec{F}_2 and \vec{F}_3 are vertical, and the lever makes an angle of 45° with the horizontal. Do these forces cause the lever to rotate about the pivot? If so, in which direction?

On the very left, we see th...

It's interesting that the white ...

Is the reference frame i... 2

How does force affect ... 2

I was curious about this, t... 3

I understand partially w... 3

In this class, we always emp...

The part before this wa... 2

The extended free-body d... 4

the net... 3

I don't understand why ... 3

It is important to note that... 2

This reminds me of when we ...

Torque is the ability of a forc...

The type of diagram to use d...

It sounds like it is sayin... 3

So then do we have a p... 5

Since torque is the cross pro...

The right-hand rule can al... 3

I don't understand how ... 3

Orientation-based descriptio...

I don't really understand... 2

How small is small? As ... 3

I think it would be slightly ...

While I believe I underst... 3

(a) The change in rotationa...

As we saw earlier in the chap...

Objects executing motion ar...

Generally, for rotating bod... 2

Does torque have the s... 3

gradebook

Gradebook

Click on a grade to see details about the student's assignment.

Copy to clipboard

Download

Search:

| Student Name | Student ID | Chapter 1 | Chapter 2 | Ch |
|--------------|------------|-----------|-----------|----|
| [blurred] | 3 | 2 | | |
| [blurred] | 3 | 3 | | |
| [blurred] | 3 | 3 | | |
| [blurred] | 3 | 3 | | |
| [blurred] | 3 | 3 | | |
| [blurred] | 3 | | | |
| [blurred] | 1 | 2 | | |
| [blurred] | 0 | | | |
| [blurred] | 3 | 3 | | |

Release to students

Release to students

Re

gradebook

Gradebook

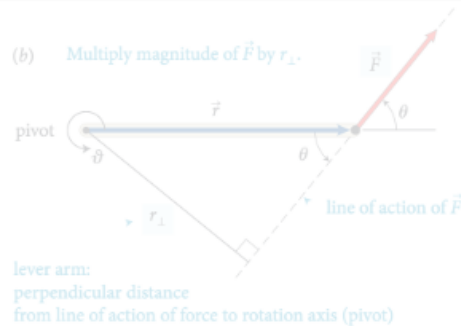
Click on a grade to see details about the student's assignment.

Copy to clipboard

Download

Search:

| Student Name | Student ID | Chapter 1 | Chapter 2 | Ch | |
|--------------|------------|--|-----------|----|------|
| [REDACTED] | | 3 | | | |
| [REDACTED] | | 3 | | | |
| [REDACTED] | | 3 | | | |
| [REDACTED] | | | | | |
| [REDACTED] | | 3 | | | |
| [REDACTED] | | 3 | | | |
| [REDACTED] | | 1 | | | |
| [REDACTED] | | | | | |
| [REDACTED] | | 0 | | | |
| [REDACTED] | | 3 | | | |
| | | Total number of annotations | | | 16 |
| | | Total number of annotations submitted on time | | | 11 |
| | | Average quality of top 10 annotations submitted on time | | | 1.80 |
| | | 2 = demonstrates thorough and thoughtful reading and insightful interpretation of the reading, 1 = demonstrates reading, but no (or only superficial) interpretation of the reading, 0 = does not demonstrate any thoughtful reading or interpretation | | | |
| | | Distribution of annotations | | | 3.8 |
| | | 0 = clustered, 5 = evenly distributed throughout assignment | | | |
| | | Assignment score | | | 1 |
| | | scores range from 0 to 3 | | | |



action of the force and the axis of rotation. So, the torque caused by a force exerted on an object is the product of the magnitude of the force and its lever arm distance. It can be

reference point



The lever arm distances must now be determined relative to the left end of the rod. The lever arm distance of force \vec{F}_1 to this point is zero, and so the torque caused by that force about the left end of the rod is zero. If I choose counterclockwise as the positive direction of rotation, \vec{F}_2 causes a negative torque about the left end of the rod; the force \vec{F}_{pr} exerted by the pivot causes a positive torque about the left end of the rod. The lever arm distance of \vec{F}_2 about the left end of the rod is $r_1 + r_2$; that of \vec{F}_{pr} is r_1 . Because the rod is at rest, the magnitude of the force exerted by the pivot is equal to the sum of the forces \vec{F}_1 and \vec{F}_2 . Taking into account the signs of the torques, we find that the sum of the torques about the left end of the rod is $r_1(F_1 + F_2) - (r_1 + r_2)F_2 = r_1F_1 - r_2F_2$. This is the same result we obtained for the torques about the pivot, and so the sum of the torques about the left end is zero. ✓

Exercise 12.1 shows that the sum of the torques about the left end of the rod is zero, just like the sum of the torques about the pivot. The reason is that the rod is not rotating about any point, and so the sum of the torques must be zero about any point. In general we can say:

For a stationary object, the sum of the torques is zero.

For a stationary object we can choose any reference point we like to calculate torques. It pays to choose a reference point that simplifies the calculation. As you have seen, we do not need to consider any force that is exerted at the reference point. So, by putting the reference point at the point of application of a force, we can eliminate that force from the calculation.



12.2 In the situation depicted in Figure 12.2a, you must continue to exert a force on the seesaw to keep the child off the ground. The force you exert causes a torque on the seesaw, and yet the seesaw's rotational acceleration is zero. How can this be if torques cause objects to accelerate rotationally?

Example 12.2 Torques on lever

Three forces are exerted on the lever of Figure 12.7. Forces \vec{F}_1 and \vec{F}_2 are equal in magnitude, and the magnitude of \vec{F}_3 is half as great. Force \vec{F}_1 is horizontal, \vec{F}_2 and \vec{F}_3 are vertical, and the lever makes an angle of 45° with the horizontal. Do these forces cause the lever to rotate about the pivot? If so, in which direction?

connect pre-class and in-class activities

I don't think we can calculate torque without knowing the direction of the force. Even if we know the magnitude of the force, we need to know the direction of the force to calculate torque. It seems like we would need to know some sort of direction to calculate torque.

I think you may be able to think about the direction separately. So, after multiplying this magnitude and distance, you can attach a sign to the torque based on the defined parameters of the system. In the following paragraph, they start to explain how to choose this direction.

This is a great question. To further elaborate on this, we can think of this in terms of the Torque equation. The equation for torque is $\tau = r \times F$, with r being the level arm distance and F being force. We know that force is a vector vector from previous chapters, and in regards to " r " it can also be thought of as the radial vector. What this means is that this distance from the pivot points from the axis of rotation to the point where the force acts. In as previously mentioned, there is a general convention (the right-hand rule) that is used to determine the direction which happens to be perpendicular to both the radius from the axis and to the force.

Enter your comment or question and press Enter

On the very left, we see th...

It's interesting that the white ...

Is the refernece frame i... 2

How does force affect ... 2

I was curious about this, t... 3

I understand partially w... 3

In this class, we always emp...

The part before this wa... 2

The extended free-body d... 4

This just means the net... 3

I don't understand why ... 3

It is important to note that... 2

This is a good question when we ...

Torque is the ability of a forc...

The type of diagram to use d...

It sounds like it is sayin... 3

So then do we have a p... 5

Since torque is the cross pro...

The right-hand rule can al... 3

I don't understand how ... 3

Orientation-based descriptio...

I don't really understand... 2

How small is small? As ... 3

I think it would be slightly ...

While I believe I underst... 3

(a) The change in rotationa...

As we saw earlier in the chap...

Objects executing motion ar...

Generally, for rotating bod... 2

Does torque have the s... 3

Confusion report for Chapter 24

right hand rule (11 questions)

- JB Can someone in simpler terms explain the right- hand rule? +1
- WJ Is there another way, besides the right hand rule, to find the direction of the magnetic field with a current? 2
- SB Using the right hand rule, I believe the answer is D. Is that correct? 3
Show more...

direction magnetic field (8 questions)

- CP Why is it that the magnet field points away from the north pole and towards the south pole? When on the previous page it stated that the direction of the magnetic field is the direction that the north pole of a compass needle points. +2
- AB How can you determine which direction the magnetic field will point towards? +1
- KH So whichever way the north pole faces is the direction of the magnetic field but that doesn't always mean its pointing true north? +1
Show more...

earth magnetic field (6 questions)

- CP Does that mean that the compass will be distracted from the Earth's magnetic field and use the magnetic field that the current of the wire gives off? 2
- AK Can someone explain why this type of bacteria knows what direction the earth's magnetic fields are facing? 3
- J Does the circular loop of current have any similarities with the look of the earths magnetic field? They kind of look similar to me. 3
Show more...

motivating factors

Intrinsic:

• social interaction

(b) Multiply magnitude of \vec{F} by r_{\perp} .



lever arm:
perpendicular distance
from line of action of force to rotation axis (pivot)

action of the force and the axis of rotation. So, the torque caused by a force exerted on an object is the product of the magnitude of the force and its lever arm distance. It can be

The lever arm distances must now be determined relative to the left end of the rod. The lever arm distance of force \vec{F}_1 to this point is zero, and so the torque caused by that force about the left end of the rod is zero. If I choose counterclockwise as the positive direction of rotation, \vec{F}_2 causes a negative torque about the left end of the rod; the force \vec{F}_{pr} exerted by the pivot causes a positive torque about the left end of the rod. The lever arm distance of \vec{F}_2 about the left end of the rod is $r_1 + r_2$; that of \vec{F}_{pr} is r_1 . Because the rod is at rest, the magnitude of the force exerted by the pivot is equal to the sum of the forces \vec{F}_1 and \vec{F}_2 . Taking into account the signs of the torques, we find that the sum of the torques about the left end of the rod is $r_1(F_1 + F_2) - (r_1 + r_2)F_2 = r_1F_1 - r_2F_2$. This is the same result we obtained for the torques about the pivot, and so the sum of the torques about the left end is zero. ✓

Exercise 12.1 shows that the sum of the torques about the left end of the rod is zero, just like the sum of the torques about the pivot. You can repeat the calculation for the torques about the right end of the rod or any other point, and each time you will find that the sum of the torques is zero. The reason is that the rod is not rotating about any point, and so the sum of the torques must be zero about any point. In general we can say:

For a stationary object, the sum of the torques is zero.

For a stationary object we can choose any reference point we like to calculate torques. It pays to choose a reference point that simplifies the calculation. As you have seen, we do not need to consider any force that is exerted at the reference point. So, by putting the reference point at the point of application of a force, we can eliminate that force from the calculation.



12.2 In the situation depicted in Figure 12.2a, you must continue to exert a force on the seesaw to keep the child off the ground. The force you exert causes a torque on the seesaw, and yet the seesaw's rotational acceleration is zero. How can this be if torques cause objects to accelerate rotationally?

Example 12.2 Torques on lever

Three forces are exerted on the lever of Figure 12.7. Forces \vec{F}_1 and \vec{F}_2 are equal in magnitude, and the magnitude of \vec{F}_3 is half as great. Force \vec{F}_1 is horizontal, \vec{F}_2 and \vec{F}_3 are vertical, and the lever makes an angle of 45° with the horizontal. Do these forces cause the lever to rotate about the pivot? If so, in which direction?

? I don't understand how this combination of factors tells you anything about direction? Aren't magnitude and lever arm distance both scalar quantities? It seems like we would need to know some sort of direction to calculate torque. Oct 20 12:09 am

? I think you may be able to think about the direction separately. So, after multiplying this magnitude and distance, you can attach a sign to the torque based on the defined parameters of the system. In the following paragraph, they start to explain how to choose this direction. Oct 20 12:38 am

This is a great question. To further elaborate on this, we can think of this in terms of the Torque equation. The equation for torque is $\tau = r \times F$, with r being the level arm distance and F being force. We know that force is a vector vector from previous chapters, and in regards to " r " it can also be thought of as the radial vector. What this means is that this distance from the pivot points from the axis of rotation to the point where the force acts. In as previously mentioned, there is a general convention (the right-hand rule) that is used to determine the direction which happens to be perpendicular to both the radius from the axis and to the force. Oct 22 8:48 pm

Enter your comment or question and press Enter

On the very left, we see th...

It's interesting that the white ...

Is the reference frame i... 2

How does force affect ... 2

I was curious about this, t... 3

I understand partially w... 3

In this class, we always emp...

The part before this wa... 2

The extended free-body d... 4

This just means the net... 3

I don't understand why ... 3

It is important to note that... 2

This reminds me of when we ...

Torque is the ability of a forc...

The type of diagram to use d...

It sounds like it is sayin... 3

So then do we have a p... 5

Since torque is the cross pro...

The right-hand rule can al... 3

I don't understand how ... 3

Orientation-based descriptio...

I don't really understand... 2

How small is small? As ... 3

I think it would be slightly ...

While I believe I underst... 3

(a) The change in rotationa...

As we saw earlier in the chap...

Objects executing motion ar...

Generally, for rotating bod... 2

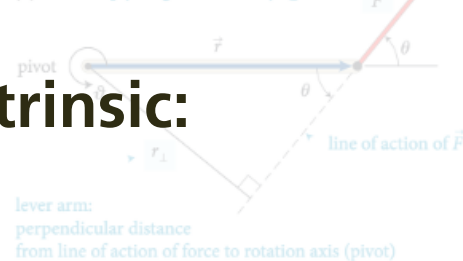
Does torque have the s... 3

motivating factors

Intrinsic:

- social interaction
- tie-in to in-class activity

(b) Multiply magnitude of \vec{F} by r_{\perp} .



lever arm:

perpendicular distance
from line of action of force to rotation axis (pivot)

action of the force and the axis of rotation. So, the torque caused by a force exerted on an object is the product of the magnitude of the force and its lever arm distance. It can be

The lever arm distances must now be determined relative to the left end of the rod. The lever arm distance of force \vec{F}_1 to this point is zero, and so the torque caused by that force about the left end of the rod is zero. If I choose counterclockwise as the positive direction of rotation, \vec{F}_2 causes a negative torque about the left end of the rod; the force \vec{F}_{pr} exerted by the pivot causes a positive torque about the left end of the rod. The lever arm distance of \vec{F}_2 about the left end of the rod is $r_1 + r_2$; that of \vec{F}_{pr} is r_1 . Because the rod is at rest, the magnitude of the force exerted by the pivot is equal to the sum of the forces \vec{F}_1 and \vec{F}_2 . Taking into account the signs of the torques, we find that the sum of the torques about the left end of the rod is $r_1(F_1 + F_2) - (r_1 + r_2)F_2 = r_1F_1 - r_2F_2$. This is the same result we obtained for the torques about the pivot, and so the sum of the torques about the left end is zero. ✓

Exercise 12.1 shows that the sum of the torques about the left end of the rod is zero, just like the sum of the torques about the pivot. We can repeat the calculation for the torques about the right end of the rod or any other point, and each time you will find that the sum of the torques is zero. The reason is that the rod is not rotating about any point, and so the sum of the torques must be zero about any point. In general we can say:

For a stationary object, the sum of the torques is zero.

For a stationary object we can choose any reference point we like to calculate torques. It pays to choose a reference point that simplifies the calculation. As you have seen, we do not need to consider any force that is exerted at the reference point. So, by putting the reference point at the point of application of a force, we can eliminate that force from the calculation.



12.2 In the situation depicted in Figure 12.2a, you must continue to exert a force on the seesaw to keep the child off the ground. The force you exert causes a torque on the seesaw, and yet the seesaw's rotational acceleration is zero. How can this be if torques cause objects to accelerate rotationally?

Example 12.2 Torques on lever

Three forces are exerted on the lever of Figure 12.7. Forces \vec{F}_1 and \vec{F}_2 are equal in magnitude, and the magnitude of \vec{F}_3 is half as great. Force \vec{F}_1 is horizontal, \vec{F}_2 and \vec{F}_3 are vertical, and the lever makes an angle of 45° with the horizontal. Do these forces cause the lever to rotate about the pivot? If so, in which direction?

On the very left, we see th...

It's interesting that the white ...

Is the reference frame i... 2

How does force affect ... 2

I was curious about this, t... 3

I understand partially w... 3

In this class, we always emp...

The part before this wa... 2

The extended free-body d... 4

This just means the net... 3

I don't understand why ... 3

It is important to note that... 2

This reminds me of when we ...

Torque is the ability of a forc...

The type of diagram to use d...

It sounds like it is sayin... 3

So then do we have a p... 5

Since torque is the cross pro...

The right-hand rule can al... 3

I don't understand how ... 3

Orientation-based descriptio...

I don't really understand... 2

How small is small? As ... 3

I think it would be slightly ...

While I believe I underst... 3

(a) The change in rotationa...

As we saw earlier in the chap...

Objects executing motion ar...

Generally, for rotating bod... 2

Does torque have the s... 3

I don't understand how this com...
factors tells you anything about direction? Aren't magnitude and lever arm distance both scalar quantities? It seems like we would need to know some sort of direction to calculate torque.

I think you may be able to think about the direction separately. So, after multiplying this magnitude and distance, you can attach a sign to the torque based on the defined parameters of the system. In the following paragraph, they start to explain how to choose this direction.

This is a great question. To further elaborate on this, we can think of this in terms of the Torque equation. The equation for torque is $\tau = r \times F$, with r being the level arm distance and F being force. We know that force is a vector vector from previous chapters, and in regards to " r " it can also be thought of as the radial vector. What this means is that this distance from the pivot points from the axis of rotation to the point where the force acts. In as previously mentioned, there is a general convention (the right-hand rule) that is used to determine the direction which happens to be perpendicular to both the radius from the axis and to the force.

Enter your comment or question and press Enter

motivating factors

Intrinsic:

- social interaction

- tie-in to in-class activity

Extrinsic:

- assessment (fully automated)

(b) Multiply magnitude of \vec{F} by r_{\perp} .



lever arm:

perpendicular distance
from line of action of force to rotation axis (pivot)

action of the force and the axis of rotation. So, the torque caused by a force exerted on an object is the product of the magnitude of the force and its lever arm distance. It can be

The lever arm distances must now be determined relative to the left end of the rod. The lever arm distance of force \vec{F}_1 to this point is zero, and so the torque caused by that force about the left end of the rod is zero. If I choose counterclockwise as the positive direction of rotation, \vec{F}_2 causes a negative torque about the left end of the rod; the force \vec{F}_{pr} exerted by the pivot causes a positive torque about the left end of the rod. The lever arm distance of \vec{F}_2 about the left end of the rod is $r_1 + r_2$; that of \vec{F}_{pr} is r_1 . Because the rod is at rest, the magnitude of the force exerted by the pivot is equal to the sum of the forces \vec{F}_1 and \vec{F}_2 . Taking into account the signs of the torques, we find that the sum of the torques about the left end of the rod is $r_1(F_1 + F_2) - (r_1 + r_2)F_2 = r_1F_1 - r_2F_2$. This is the same result we obtained for the torques about the pivot, and so the sum of the torques about the left end is zero. ✓

Exercise 12.1 shows that the sum of the torques about the left end of the rod is zero, just like the sum of the torques about the pivot. We can repeat the calculation for the torques about the right end of the rod or any other point, and each time you will find that the sum of the torques is zero. The reason is that the rod is not rotating about any point, and so the sum of the torques must be zero about any point. In general we can say:

For a stationary object, the sum of the torques is zero.

For a stationary object we can choose any reference point we like to calculate torques. It pays to choose a reference point that simplifies the calculation. As you have seen, we do not need to consider any force that is exerted at the reference point. So, by putting the reference point at the point where a particular force is exerted, we can ignore that force from the calculation.



12.2 In the situation depicted in Figure 12.2a, you must continue to exert a force on the seesaw to keep the child off the ground. The force you exert causes a torque on the seesaw, and yet the seesaw's rotational acceleration is zero. How can this be if torques cause objects to accelerate rotationally?

Example 12.2 Torques on lever

Three forces are exerted on the lever of Figure 12.7. Forces \vec{F}_1 and \vec{F}_2 are equal in magnitude, and the magnitude of \vec{F}_3 is half as great. Force \vec{F}_1 is horizontal, \vec{F}_2 and \vec{F}_3 are vertical, and the lever makes an angle of 45° with the horizontal. Do these forces cause the lever to rotate about the pivot? If so, in which direction?

On the very left, we see th...

It's interesting that the white ...

Is the reference frame i... 2

How does force affect ... 2

I was curious about this, t... 3

I understand partially w... 3

In this class, we always emp...

The part before this wa... 2

The extended free-body d... 4

This just means the net... 3

I don't understand why ... 3

It is important to note that... 2

This reminds me of when we ...

Torque is the ability of a forc...

The type of diagram to use d...

It sounds like it is sayin... 3

So then do we have a p... 5

Since torque is the cross pro...

The right-hand rule can al... 3

I don't understand how ... 3

Orientation-based descriptio...

I don't really understand... 2

How small is small? As ... 3

I think it would be slightly ...

While I believe I underst... 3

(a) The change in rotationa...

As we saw earlier in the chap...

Objects executing motion ar...

Generally, for rotating bod... 2

Does torque have the s... 3

I don't understand how this comment... factors tells you anything about direction? Aren't magnitude and lever arm distance both scalar quantities? It seems like we would need to know some sort of direction to calculate torque.

I think you may be able to think about the direction separately. If you know the magnitude and distance, you can attach a sign to the torque based on the defined parameters of the system. In the following paragraph, they start to explain how to choose this direction.

This is a great question. To further elaborate on this, we can think of this in terms of the Torque equation. Torque is $\tau = r \times F$, with r being the level arm distance and F being force. We know that force is a vector vector from previous chapters, and in regards to " r " it can also be thought of as the radial vector. What this means is that this distance from the pivot points from the axis of rotation to the point where the force acts. In as previously mentioned, there is a general convention (the right-hand rule) that is used to determine the direction which happens to be perpendicular to both the radius from the axis and to the force.

Enter your comment or question and press Enter

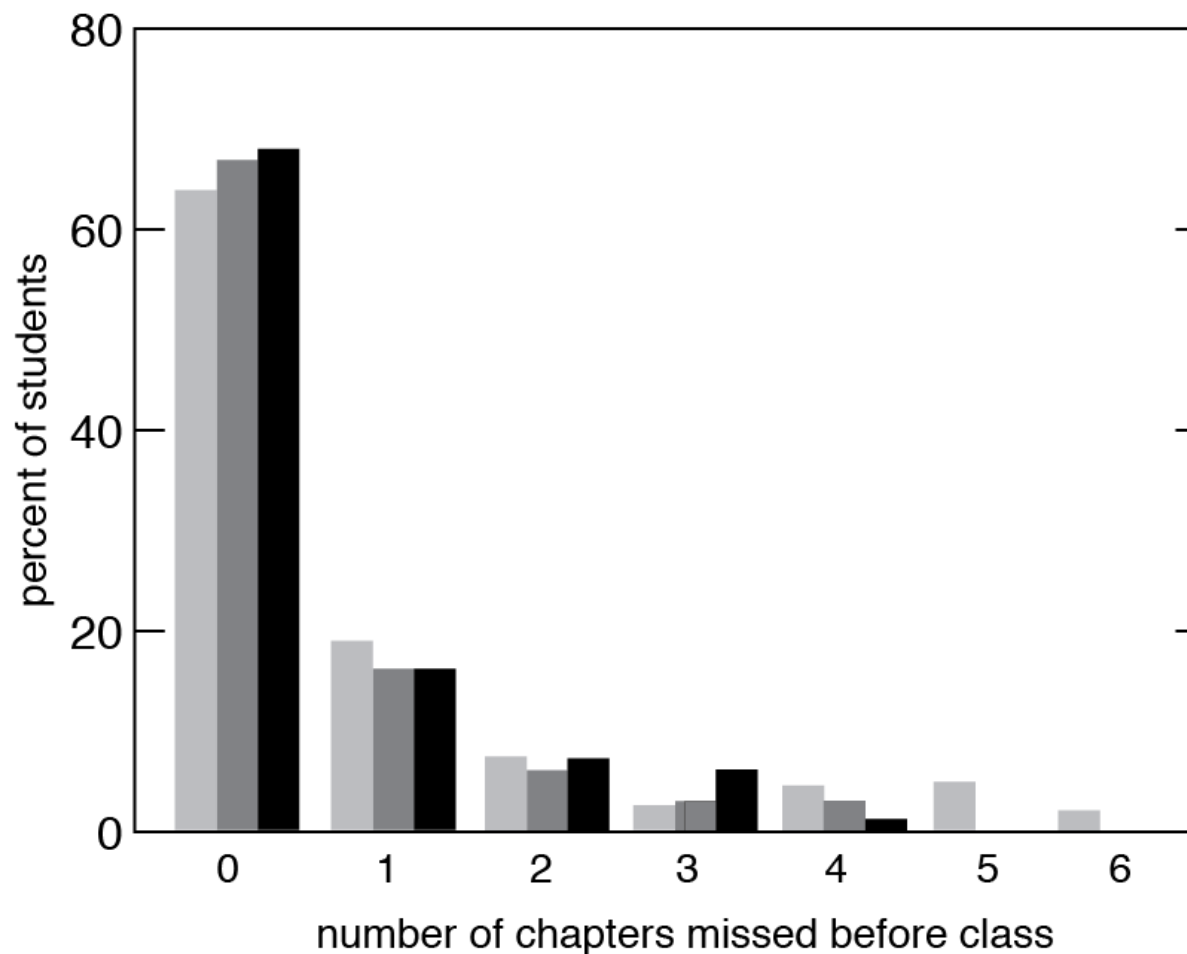
class test results

(b) Multiply magnitude of \vec{F} by r_{\perp} .

\vec{F}

Reference point

The lever arm distances must now be determined relative to the left end of the rod. The lever arm distance of force \vec{F}_1 to this



On the very left, we see th...

It's interesting that the white ...

a reference frame i... 2

does force affect ... 2

curious about this, t... 3

understand partially w... 3

class, we always emp... 2

part before this wa... 2

ended free-body d... 4

just means the net... 3

it understand why ... 3

important to note that... 2

minds me of when we ... 2

is the ability of a forc... 2

of diagram to use d... 2

nds like it is sayin... 3

en do we have a p... 5

orque is the cross pro... 3

nt-hand rule can al... 3

it understand how ... 3

tion-based descriptio... 2

it really understand... 2

small is small? As ... 3

it would be slightly ... 3

I believe I underst... 3

(a) The change in rotation... 3

As we saw earlier in the chap... 2

Objects executing motion ar... 2

Generally, for rotating bod... 2

Does torque have the s... 3

class test results

(b) Multiply magnitude of \vec{F} by r_{\perp} .

\vec{F}

Reference point

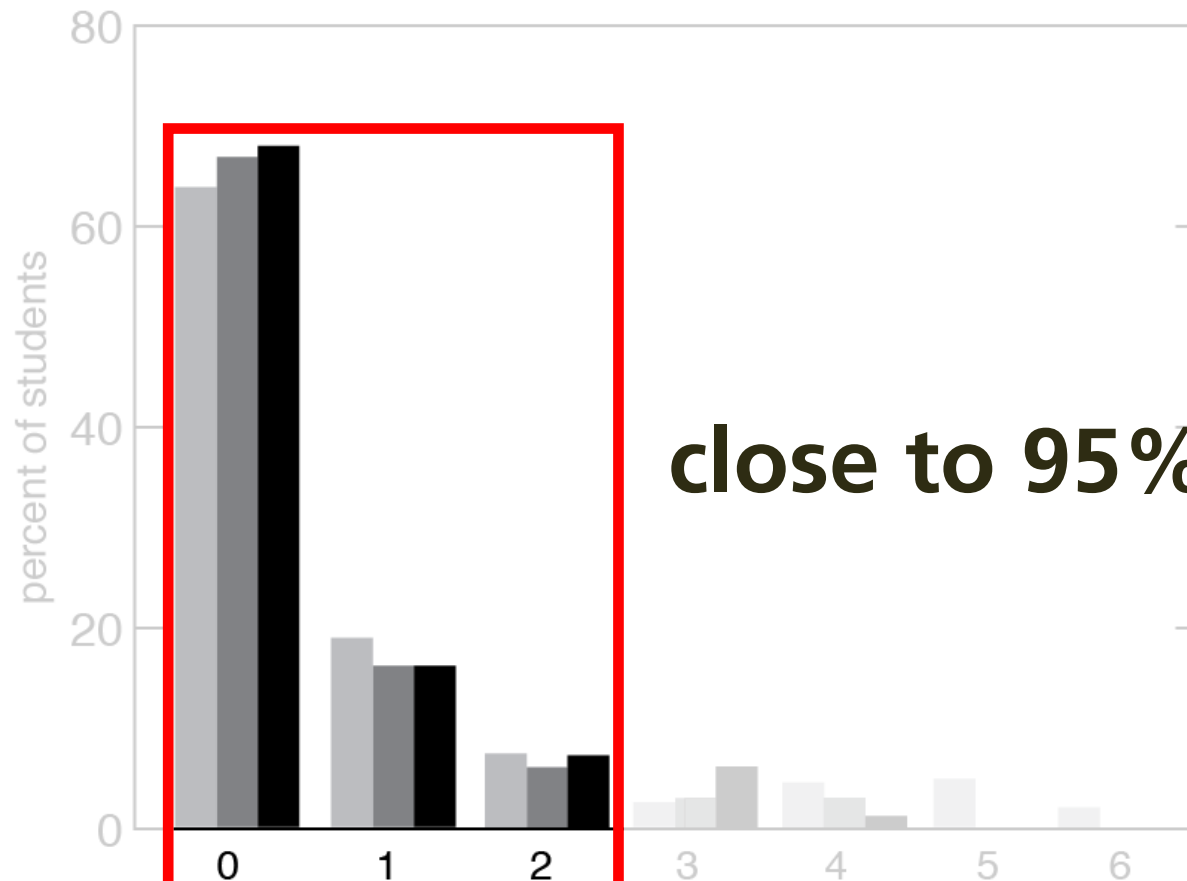
The lever arm distances must now be determined relative to the left end of the rod. The lever arm distance of force \vec{F}_1 to this

Page 284

Eric Mazur

On the very left, we see th...

It's interesting that the white ...



close to 95%!

number of chapters missed before class

Example 12.2 Torques on lever

Three forces are exerted on the lever of [Figure 12.7](#). Forces \vec{F}_1 and \vec{F}_3 are equal in magnitude, and the magnitude of \vec{F}_2 is half as great. Force \vec{F}_1 is horizontal, \vec{F}_2 and \vec{F}_3 are vertical, and the lever makes an angle of 45° with the horizontal. Do these forces cause the lever to rotate about the pivot? If so, in which direction?

(a) The change in rotation...

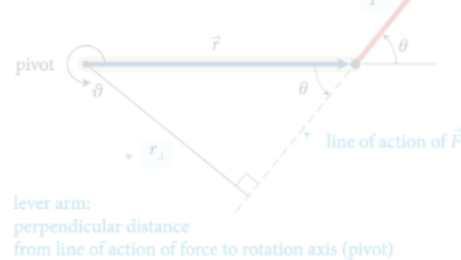
As we saw earlier in the chap...

Objects executing motion ar...

Generally, for rotating bod...

Does torque have the s...

class test results

(b) Multiply magnitude of \vec{F} by r_{\perp} .

lever arm:
perpendicular distance
from line of action of force to rotation axis (pivot)

action of the force and the axis of rotation. So, the torque caused by a force exerted on an object is the product of the magnitude of the force and its lever arm distance. It can be

The lever arm distances must now be determined relative to the left end of the rod. The lever arm distance of force \vec{F}_1 to this point is zero, and so the torque caused by that force about the left end of the rod is zero. If I choose counterclockwise as the positive direction of rotation, \vec{F}_2 causes a negative torque about the left end of the rod; the force \vec{F}_{pr} exerted by the pivot causes a positive torque about the left end of the rod. The lever arm distance of \vec{F}_2 about the left end of the rod is $r_1 + r_2$; that of \vec{F}_{pr} is r_1 . Because the rod is at rest, the magnitude of the force exerted by the pivot is equal to the sum of the forces \vec{F}_1 and \vec{F}_2 . Taking into account the signs of the torques, we find that the sum of the torques about the left end of the rod is $r_1(F_1 + F_2) - (r_1 + r_2)F_2 = r_1F_1 - r_2F_2$. This is the same result we obtained for the torques about the pivot, and so the sum of the torques about the left end is zero. ✓

Exercise 12.1 shows that the sum of the torques about the left end of the rod is zero, just like the sum of the torques about the pivot. You can repeat the calculation for the right end of the rod and find that the sum of the torques is also zero. The reason is that the rod is not rotating about any point, and so the sum of the torques must be zero about any point. In general we can say:

For a stationary object, the sum of the torques is zero.

For a stationary object we can choose any reference point we like to calculate torques. It pays to choose a reference point that simplifies the calculation. As you have seen, we do not need to consider any force that is exerted at the reference point. So, by putting the reference point at the point of application of a force, we can eliminate that force from the calculation.



12.2 In the situation depicted in Figure 12.2a, you must continue to exert a force on the seesaw to keep the child off the ground. The force you exert causes a torque on the seesaw, and yet the seesaw's rotational acceleration is zero. How can this be if torques cause objects to accelerate rotationally?

Example 12.2 Torques on lever

Three forces are exerted on the lever of Figure 12.7. Forces \vec{F}_1 and \vec{F}_2 are equal in magnitude, and the magnitude of \vec{F}_3 is half as great. Force \vec{F}_1 is horizontal, \vec{F}_2 and \vec{F}_3 are vertical, and the lever makes an angle of 45° with the horizontal. Do these forces cause the lever to rotate about the pivot? If so, in which direction?

every student prepared for every class

I don't understand how this combination of... Oct 20 12:09 am

I think you may be able to think about the direction separately. So, after multiplying this magnitude and distance, you can attach a sign to the torque based on the defined parameters of the system. In the following paragraph, they start to explain how to choose this direction. Oct 20 12:38 am

This is a great question. To further elaborate on this, we can think of this in terms of the Torque equation. The equation for torque is $\tau = r \times F$, with r being the level arm distance and F being force. We know that force is a vector vector from previous chapters, and in regards to "r" it can also be thought of as the radial vector. What this means is that this distance from the pivot points from the axis of rotation to the point where the force acts. In as previously mentioned, there is a general convention (the right-hand rule) that is used to determine the direction which happens to be perpendicular to both the radius from the axis and to the force. Oct 22 8:48 pm

Enter your comment or question and press Enter

On the very left, we see th...

It's interesting that the white ...

Is the refernece frame i... 2

How does force affect ... 2

I was curious about this, t... 3

I understand partially w... 3

In this class, we always emp...

The part before this wa... 2

The extended free-body d... 4

This just means the net... 3

I don't understand why ... 3

It is important to note that... 2

This reminds me of when you...

To me is a...

The type of diagram to use d...

It sounds like it is sayin... 3

So then do we have a p... 5

Since torque is the cross pro...

The right-hand rule can al... 3

I don't understand how ... 3

Orientation-based descriptio...

I don't really understand... 2

How small is small? As ... 3

I think it would be slightly ...

While I believe I underst... 3

(a) The change in rotationa...

As we saw earlier in the chap...


Objects executing motion ar...

Generally, for rotating bod... 2

Does torque have the s... 3

Perusall AP50 Fall 2015 » Chapter 12 Group 1's comments Page 284 Eric Mazur

(b) Multiply magnitude of \vec{F} by r_{\perp} .



reference point

The lever arm distances must now be determined relative to the left end of the rod. The lever arm distance of force \vec{F}_1 to this point is zero, and so the torque caused by that force about the left end of the rod is zero. If I choose counterclockwise as the

On the very left, we see th...
It's interesting that the white ...
Is the reference frame i... 2

out of class

information
transfer

Perusall

in class

sense-making

Peer Instruction

can think of this in terms of the Torque equation. The equation for torque is $\tau = r \times F$, with r being the level arm distance and F being force. We know that force is a vector vector from previous chapters, and in regards to " r " it can also be thought of as the radial vector. What this means is that this distance from the pivot points from the axis of rotation to the point where the force acts. In as previously mentioned, there is a general convention (the right-hand rule) that is used to determine the direction which happens to be perpendicular to both the radius from the axis and to the force.

Enter your comment or question and press Enter

an application of a force, we can eliminate that force from the calculation.



12.2 In the situation depicted in Figure 12.2a, you must continue to exert a force on the seesaw to keep the child off the ground. The force you exert causes a torque on the seesaw, and yet the seesaw's rotational acceleration is zero. How can this be if torques cause objects to accelerate rotationally?

Example 12.2 Torques on lever

Three forces are exerted on the lever of **Figure 12.7**. Forces \vec{F}_1 and \vec{F}_3 are equal in magnitude, and the magnitude of \vec{F}_2 is half as great. Force \vec{F}_1 is horizontal, \vec{F}_2 and \vec{F}_3 are vertical, and the lever makes an angle of 45° with the horizontal. Do these forces cause the lever to rotate about the pivot? If so, in which direction?

Orientation-based descriptio...


- I don't really understand... 2
- How small is small? As ... 3
- I think it would be slightly ...
- While I believe I understand... 3
- (a) The change in rotationa...

As we saw earlier in the chap...

Objects executing motion ar...

Generally, for rotating bod... 2

Does torque have the s... 3



in class

information transfer

sense-making

Peer Instruction

❓ I think it would be slightly ...



Education is not just about:

- **transferring information**
- **getting students to do what we do**



Education is not just about:

- **transferring information**
- **getting students to do what we do**

active engagement/social interaction a must!

ericmazur.com

Follow me!



eric_mazur